

Exam

Name _____

MULTIPLE CHOICE. Choose the one alternative that best completes the statement or answers the question.**Decide whether the statement is true or false.**

- 1) -2 is a solution of $-5x = 10$. 1) _____
 A) True B) False
 Answer: A
- 2) -5 is a solution of $-6x = 26$. 2) _____
 A) True B) False
 Answer: B
- 3) -7 is a solution of $-6x - 9 = 33$. 3) _____
 A) True B) False
 Answer: A
- 4) 4 is a solution of $8x + 7 = 35$. 4) _____
 A) True B) False
 Answer: B
- 5) -2 is a solution of $7x + 6x = -26$. 5) _____
 A) True B) False
 Answer: A
- 6) 5 is a solution of $6x - 2x = 39$. 6) _____
 A) True B) False
 Answer: B
- 7) 4 is a solution of $7x + 3x = 9x$. 7) _____
 A) True B) False
 Answer: B

Decide whether or not the equations are equivalent.

- 8) $z^2 = 25$ 8) _____
 $z = 5$
 A) Not equivalent B) Equivalent
 Answer: A
- 9) $x = -3$ 9) _____
 $x^2 = 9$
 A) Not equivalent B) Equivalent
 Answer: A
- 10) $x = 1 - 3x$ 10) _____
 $2x = 1$
 A) Not equivalent B) Equivalent
 Answer: A

11) $\frac{x+1}{5} = \frac{4}{5}$ 11) _____
 $x+2=5$
A) Equivalent B) Not equivalent
Answer: A

12) $4x-3=6$ 12) _____
 $-4x+6=-3$
A) Not equivalent B) Equivalent
Answer: B

13) $4x-4=9$ 13) _____
 $-4x-4=9$
A) Equivalent B) Not equivalent
Answer: B

Determine whether or not the equation is linear.

14) $2x+7(x-9)=11x$ 14) _____
A) Not linear B) Linear
Answer: B

15) $4x+7x(x-2)=16x$ 15) _____
A) Linear B) Not linear
Answer: B

16) $3x^2-7x+2=0$ 16) _____
A) Not linear B) Linear
Answer: A

17) $0.03x+0.07x=0.90$ 17) _____
A) Linear B) Not linear
Answer: A

18) $0.06x^2-0.07x=0.90$ 18) _____
A) Not linear B) Linear
Answer: A

19) $6x=7x+8x$ 19) _____
A) Not linear B) Linear
Answer: B

20) $7x-2x=0$ 20) _____
A) Linear B) Not linear
Answer: A

21) $3x+7=0$ 21) _____
A) Linear B) Not linear
Answer: A

Solve the equation.

22) $-4x - 4 = x + 5$

A) $\left\{-\frac{1}{5}\right\}$

B) $\left\{-\frac{9}{4}\right\}$

C) $\left\{-\frac{1}{4}\right\}$

D) $\left\{-\frac{9}{5}\right\}$

22) _____

Answer: D

23) $4x - 6 + 7(x + 1) = -3x - 4$

A) $\left\{-\frac{17}{4}\right\}$

B) $\left\{-\frac{5}{4}\right\}$

C) $\left\{-\frac{17}{14}\right\}$

D) $\left\{-\frac{5}{14}\right\}$

23) _____

Answer: D

24) $-2[7x + 7 + 6(x + 1)] = -3x + 6$

A) $\left\{-\frac{4}{23}\right\}$

B) $\left\{\frac{4}{7}\right\}$

C) $\left\{\frac{32}{7}\right\}$

D) $\left\{-\frac{32}{23}\right\}$

24) _____

Answer: D

25) $\frac{x + 8}{7} = \frac{x + 9}{9}$

A) $\left\{-\frac{9}{2}\right\}$

B) $\left\{-\frac{9}{16}\right\}$

C) $\left\{\frac{55}{2}\right\}$

D) $\left\{\frac{135}{2}\right\}$

25) _____

Answer: A

26) $1 - \frac{5}{7x} = \frac{2}{10}$

A) $\left\{-\frac{25}{4}\right\}$

B) $\left\{\frac{25}{28}\right\}$

C) $\left\{-\frac{25}{28}\right\}$

D) $\{-50\}$

26) _____

Answer: B

27) $6x + 3 + 2(x + 1) = -(4x - 4)$

A) $\left\{-\frac{3}{2}\right\}$

B) $\left\{-\frac{1}{6}\right\}$

C) $\left\{-\frac{3}{4}\right\}$

D) $\left\{-\frac{1}{12}\right\}$

27) _____

Answer: D

28) $-5[-4x + 5 - 2(x + 1)] = 3x - 4$

A) $\left\{-\frac{13}{9}\right\}$

B) $\left\{\frac{11}{27}\right\}$

C) $\left\{-\frac{11}{4}\right\}$

D) $\left\{\frac{39}{4}\right\}$

28) _____

Answer: B

29) $\frac{5x}{7} - 8 = x$

A) $\{56\}$

B) $\{-28\}$

C) $\{112\}$

D) $\{28\}$

29) _____

Answer: B

30) $\frac{x + 9}{3} = \frac{x - 8}{2}$

A) $\{33\}$

B) $\left\{-\frac{42}{5}\right\}$

C) $\{6\}$

D) $\{42\}$

30) _____

Answer: D

- 31) $-2.9x + 1.3 = -10.7 - 1.4x$ 31) _____
 A) {4.6} B) {4.1} C) {-13} D) {8}
- Answer: D

Decide whether the equation is an identity, a conditional equation, or a contradiction. Give the solution set.

- 32) $10x + 10 = 2(3x - 3)$ 32) _____
 A) Identity; {all real numbers} B) Conditional; {-1}
 C) Conditional; {-4} D) Contradiction; \emptyset

Answer: C

- 33) $3(28x + 16) = 12(5x + 12)$ 33) _____
 A) Contradiction; \emptyset B) Conditional; {-8}
 C) Conditional; {4} D) Identity; {all real numbers}

Answer: C

- 34) $5(2x - 31) = 10x - 155$ 34) _____
 A) Conditional; {0} B) Contradiction; \emptyset
 C) Identity; {all real numbers} D) Identity; \emptyset

Answer: C

- 35) $-8(x - 1) + (14x) = 6(x - 9) - 14$ 35) _____
 A) Conditional; {0} B) Identity; {all real numbers}
 C) Conditional; {-9} D) Contradiction; \emptyset

Answer: D

- 36) $12(x - 1) = 6(2x - 1) - 6$ 36) _____
 A) Conditional; {-12} B) Contradiction; \emptyset
 C) Identity; {all real numbers} D) Conditional; {0}

Answer: C

- 37) $5(4x - 4) - 20x + 20 = 0$ 37) _____
 A) Conditional; {0} B) Contradiction; \emptyset
 C) Conditional; {4} D) Identity; {all real numbers}

Answer: D

- 38) $4x + 1 = 2(2x - 4)$ 38) _____
 A) Identity; {all real numbers} B) Contradiction; \emptyset
 C) Conditional; {2} D) Conditional; {-2}

Answer: B

- 39) $-8x - 42 + 2(4x + 23) = 0$ 39) _____
 A) Contradiction; \emptyset B) Conditional; {4}
 C) Identity; {all real numbers} D) Conditional; {1}

Answer: A

- 40) $2x + 5(x + 1) + 3 = 8 - 3x$ 40) _____
 A) Conditional; {1} B) Contradiction; \emptyset
 C) Identity; {all real numbers} D) Conditional; {0}

Answer: D

41) $2[3 - (6 - 5x)] - x = -12 + 3(2 + 3x)$

- A) Conditional; {12}
 C) Identity; {all real numbers}

Answer: C

- B) Conditional; {-6}
 D) Contradiction; \emptyset

41) _____

42) $-0.2(x + 9) + 0.4(x + 9) = 0.2x + 1.8$

- A) Contradiction; \emptyset
 C) Conditional; {-9}

Answer: D

- B) Conditional; {0.2}
 D) Identity; {all real numbers}

42) _____

43) $0.3(x - 8) - 0.5(x - 8) = -0.2x + 1.6$

- A) Identity; {all real numbers}
 C) Conditional; {-8}

Answer: A

- B) Conditional; {0.8}
 D) Contradiction; \emptyset

43) _____

Solve the formula for the indicated variable.

44) $A = bh$, for b

A) $b = \frac{A}{h}$

B) $b = A - b$

C) $b = Ab$

D) $b = \frac{h}{A}$

Answer: A

44) _____

45) $I = Prt$, for t

A) $t = \frac{I}{Pr}$

B) $t = P - Ir$

C) $t = \frac{P - I}{1 + r}$

D) $t = \frac{P - 1}{Ir}$

Answer: A

45) _____

46) $S = 2\pi rh + 2\pi r^2$, for h

A) $h = \frac{S}{2\pi r} - 1$

B) $h = \frac{S - 2\pi r^2}{2\pi r}$

C) $h = 2\pi(S - r)$

D) $h = S - r$

Answer: B

46) _____

47) $V = \frac{1}{3}Bh$, for h

A) $h = \frac{3B}{V}$

B) $h = \frac{V}{3B}$

C) $h = \frac{3V}{B}$

D) $h = \frac{B}{3V}$

Answer: C

47) _____

48) $P = s_1 + s_2 + s_3$, for s_1

A) $s_1 = s_2 + s_3 - P$

B) $s_1 = P + s_2 + s_3$

C) $s_1 = s_2 + P - s_3$

D) $s_1 = P - s_2 - s_3$

Answer: D

48) _____

49) $F = \frac{9}{5}C + 32$, for C

A) $C = \frac{5}{9}(F - 32)$

B) $C = \frac{F - 32}{9}$

C) $C = \frac{9}{5}(F - 32)$

D) $C = \frac{5}{F - 32}$

Answer: A

49) _____

50) $P = 2l + 2w$, for w

A) $w = P - 2l - 2$

B) $w = \frac{P}{2l + 2}$

C) $w = \frac{P}{2} - 2l$

D) $w = \frac{P - 2l}{2}$

50) _____

Answer: D

51) $R = nE - nr$, for n

A) $n = \frac{R}{E - r}$

B) $n = R - E + r$

C) $n = R + nr - E$

D) $n = \frac{R + nr}{E}$

51) _____

Answer: A

52) $A = P(1 + nr)$, for n

A) $n = \frac{A}{r}$

B) $n = \frac{Pr}{A - P}$

C) $n = \frac{P - A}{Pr}$

D) $n = \frac{A - P}{Pr}$

52) _____

Answer: D

53) $I = \frac{nE}{nr + R}$, for n

A) $n = IR(Ir - E)$

B) $n = \frac{IR}{Ir + E}$

C) $n = \frac{R}{E - Ir}$

D) $n = \frac{IR}{E - Ir}$

53) _____

Answer: D

Solve for y.

54) $7x + 10y = 7$

A) $y = 17 - 7x$

B) $y = \frac{17}{7x}$

C) $y = \frac{7 - 7x}{10}$

D) $y = 7 + 7x$

54) _____

Answer: C

55) $4x - 7y = 5$

A) $y = 4x - 12$

B) $y = 4x + 12$

C) $y = \frac{4x + 5}{7}$

D) $y = \frac{4x - 5}{7}$

55) _____

Answer: D

56) $6x = 5y - 8$

A) $y = \frac{6x - 8}{5}$

B) $y = 13 - 6x$

C) $y = 13 + 6x$

D) $y = \frac{6x + 8}{5}$

56) _____

Answer: D

57) $9 = 5x - 2y$

A) $y = 11 + 5x$

B) $y = \frac{5x + 9}{2}$

C) $y = \frac{5x - 9}{2}$

D) $y = 11 - 5x$

57) _____

Answer: C

58) $y - 4(x + 9) = 8 + 2y$

A) $y = -4x - 44$

B) $y = -4x + 44$

C) $y = 4x + 28$

D) $y = 4x + 44$

58) _____

Answer: A

59) $9x - 3(x + y) = y - x$

A) $y = 7x - 4$

B) $y = \frac{7}{4}x$

C) $y = 7x + 4$

D) $y = 7x$

59) _____

Answer: B

60) $3y + x^2 = x + 8$

A) $y = x^2 - x - 8$

B) $y = x + 8 - x^2$

C) $y = \frac{x + 8 - x^2}{3}$

D) $y = \frac{x^2 - x - 8}{3}$

60) _____

Answer: C

61) $10x^2 - y + 6x = 0$

A) $y = 10x^2 - 6x$

B) $y = -10x^2 - 6x$

C) $y = -10x^2 + 6x$

D) $y = 10x^2 + 6x$

61) _____

Answer: D

62) $7x + 6 = 6y - 3$

A) $y = \frac{7x + 9}{6}$

B) $y = 7x + 9$

C) $y = \frac{7x - 9}{6}$

D) $y = 7x - 9$

62) _____

Answer: A

Solve the problem.

63) Levi borrowed \$5073 at 4% simple interest for 5 months. How much will the interest amount to?

What is the total amount that Levi will have to pay back at the end of 5 months? Round answers to the nearest cent if necessary.

A) \$85.26; \$5158.26

B) \$84.55; \$5157.55

C) \$67.64; \$5140.64

D) \$101.46; \$5174.46

63) _____

Answer: B

64) Sophia borrowed \$16,007 at 5% simple interest for 9 months. How much will the interest amount to?

What is the total amount that she will have to pay back at the end of 9 months? Round answers to the nearest cent if necessary.

A) \$533.57; \$16,540.57

B) \$605.31; \$16,612.31

C) \$600.26; \$16,607.26

D) \$666.96; \$16,673.96

64) _____

Answer: C

65) Hannah borrowed \$45,338 at 4.5% simple interest for 22 months. How much will the interest amount to?

What is the total amount that she will have to pay back at the end of 22 months?

Round answers to the nearest cent if necessary.

A) \$3570.37; \$48,908.37

B) \$3771.82; \$49,109.82

C) \$3740.39; \$49,078.39

D) \$3910.40; \$49,248.40

65) _____

Answer: C

Use these equations to convert between the two systems.

$$C = \frac{5}{9}(F - 32) \quad F = \frac{9}{5}C + 32$$

Round answer to the nearest tenth of a degree if necessary.

66) $F = 102^\circ$

A) $C = 126^\circ$

B) $C = 53.1^\circ$

C) $C = 215.6^\circ$

D) $C = 38.9^\circ$

66) _____

Answer: D

67) $C = 98^\circ$ A) $F = 234^\circ$ B) $F = 36.7^\circ$ C) $F = 72.2^\circ$ D) $F = 208.4^\circ$ 67) _____
Answer: D

68) $F = 10^\circ$ A) $C = 2^\circ$ B) $C = -39.6^\circ$ C) $C = 23.3^\circ$ D) $C = -12.2^\circ$ 68) _____
Answer: D

69) $C = 12^\circ$ A) $F = 79.2^\circ$ B) $F = 53.6^\circ$ C) $F = 24.4^\circ$ D) $F = -11.1^\circ$ 69) _____
Answer: B

Solve the problem.

70) Find the corresponding Celsius temperature for a temperature of 143°F . Round to the nearest tenth, if necessary. 70) _____
A) 199.8°C B) 75.9°C C) 61.7°C D) 289.4°C
Answer: C

71) Find the corresponding Fahrenheit temperature for a temperature of 73°C . Round to the nearest tenth, if necessary. 71) _____
A) 22.8°F B) 189°F C) 163.4°F D) 58.3°F
Answer: C

72) Find the length of a rectangular lot with a perimeter of 132 m if the length is 8 m more than the width. 72) _____
A) 74 m B) 66 m C) 37 m D) 29 m
Answer: C

73) A square plywood platform has a perimeter which is 9 times the length of a side, decreased by 15. Find the length of a side. 73) _____
A) 8 B) 3 C) 1 D) 5
Answer: B

74) A rectangular Persian carpet has a perimeter of 216 inches. The length of the carpet is 26 in. more than the width. What are the dimensions of the carpet? 74) _____
A) Width: 67 in.; length: 93 in. B) Width: 82 in.; length: 108 in.
C) Width: 95 in.; length: 121 in. D) Width: 41 in.; length: 67 in.
Answer: D

75) A triangular shaped lake-front lot has a perimeter of 1300 ft. One side is 100 ft longer than the shortest side, while the third side is 300 ft longer than the shortest side. Find the lengths of all three sides. 75) _____
A) 400 ft, 400 ft, 400 ft B) 400 ft, 500 ft, 700 ft
C) 300 ft, 400 ft, 600 ft D) 100 ft, 200 ft, 300 ft
Answer: C

- 76) In triangle ABC , the angle C is six times as large as angle A . The measure of angle B is 44° greater than that of angle A . Find the measure of the angles. 76) _____
- A) $17^\circ, 78^\circ$ and 102° B) $17^\circ, 78^\circ$ and 85°
 C) $17^\circ, 61^\circ$ and 102° D) $17^\circ, 61^\circ$ and 119°

Answer: C

- 77) In triangle ABC , angle A is three times as large as angle C . The measure of angle B is 35° less than that of angle C . Find the measure of the angles. 77) _____
- A) $86^\circ, 8^\circ$ and 43° B) $129^\circ, 8^\circ$ and 86°
 C) $129^\circ, 8^\circ$ and 43° D) $86^\circ, 8^\circ$ and 86°

Answer: C

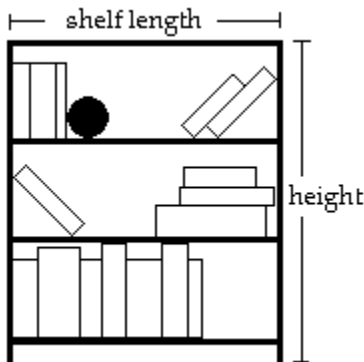
- 78) A cylindrical container has a volume of $1936\pi \text{ m}^3$ and a radius of 11 m. Find the height of the container. 78) _____
- A) 22 m B) 16 m C) 4 m D) 11 m

Answer: B

- 79) A circular hole is filled with concrete to make a footing for a load-bearing pier. The hole measures 15 inches across and requires 1.9 bags of concrete in order to fill it to ground level. What is the depth of the hole? Round your answer to the nearest inch. (One bag of concrete, when mixed with the appropriate amount of water, makes 1800 in.^3 of material.) 79) _____
- A) 23 in. B) 16 in. C) 19 in. D) 25 in.

Answer: C

- 80) A bookcase is to be constructed as shown in the figure below. The height of the bookcase is 4 feet longer than the length of a shelf. If 20 feet of lumber is available for the entire unit (including the shelves, but NOT the back of the bookcase), find the length and height of the unit. 80) _____



- A) length = 8.0 ft; height = 9.0 ft B) length = 2 ft; height = 8 ft
 C) length = 2 ft; height = 6 ft D) length = 3 ft; height = 7 ft

Answer: C

- 81) Find the height of a moving box if its length is 32 in., its width is 26 in., and its surface area is 2940 in.^2 . Assume that the surface area includes the top of the moving box. 81) _____
- A) 11 in. B) 26 in. C) 32 in. D) 9152 in.

Answer: A

- 82) Chuck and Dana agree to meet in Chicago for the weekend. Chuck travels 93 miles in the same time that Dana travels 84 miles. If Chuck's rate of travel is 3 mph more than Dana's, and they travel the same length of time, at what speed does Chuck travel? 82) _____
 A) 31 mph B) 28 mph C) 23 mph D) 39 mph
 Answer: A
- 83) In the morning, May drove to an appointment at 50 mph. Her average speed on the return trip in the afternoon was 40 mph. The return trip took $\frac{1}{5}$ hour longer. How far did she travel to the appointment? 83) _____
 A) 40 mi B) 12 mi C) 0.8 mi D) 32 mi
 Answer: A
- 84) Noah and Ben are running in the Walker Street Fun Run. Noah runs at 7 mph, Ben at 5 mph. If they start at the same time, how long (in minutes) will it be before they are $\frac{1}{6}$ mile apart? 84) _____
 A) 12 min B) 180 min C) 20 min D) 5 min
 Answer: D
- 85) Jill is 10 kilometers away from Joe. Both begin to walk toward each other at the same time. Jill walks at 2 kilometers per hour. They meet in 2 hours. How fast is Joe walking? 85) _____
 A) 2 km/hr B) 3 km/hr C) 5 km/hr D) 4 km/hr
 Answer: B
- 86) Candy and Delvis are riding bicycles in the same direction. Candy is traveling at a speed of 7 miles per hour, and Delvis is traveling at a speed of 15 miles per hour. In 5 hours what is the distance between them (assuming that they began at the same point and time)? 86) _____
 A) 49 mi B) 41 mi C) 37 mi D) 40 mi
 Answer: D
- 87) From a point on a river, two boats are driven in opposite directions, one at 9 miles per hour and the other at 14 miles per hour. In how many hours will they be 69 miles apart? 87) _____
 A) 5 hr B) 1 hr C) 3 hr D) 4 hr
 Answer: C
- 88) Tom Quig traveled 270 miles east of St. Louis. For most of the trip he averaged 60 mph, but for one period of time he was slowed to 10 mph due to a major accident. If the total time of travel was 7 hours, how many miles did he drive at the reduced speed? 88) _____
 A) 25 mi B) 30 mi C) 50 mi D) 40 mi
 Answer: B
- 89) On a recent trip, Sarah's car traveled 20 mph faster on the first 150 miles than it did on the remaining 80 miles. The total time for the trip was 4 hr. Find the speed of Sarah's car on the first part of the trip. 89) _____
 A) 66 mph B) 11 mph C) 48 mph D) 46 mph
 Answer: A

- 90) An airplane leaves Los Angeles for Denver at a speed of 420 mph. Thirty minutes later, a plane going from Denver to Los Angeles leaves Denver, which is 850 miles from Los Angeles, at a speed of 520 mph. When they meet, how far are they from Denver?
A) 307 mi B) 123 mi C) 354 mi D) 61 mi

Answer: C

- 91) An airplane flies from Metro City to Gotham with a tailwind that increases its normal speed by 100 mph. On the return trip, the plane must fly against this wind, which decreases its normal speed by the same amount. The flight from Metro City takes 3.71 hours and the return trip takes 8.67 hours. How far is it from Metro City to Gotham?
A) 1500 mi B) 1600 mi C) 1300 mi D) 1420 mi

Answer: C

- 92) How many liters of a 30% alcohol solution must be mixed with 50 liters of a 70% solution to get a 40% solution?
A) 20 L B) 15 L C) 150 L D) 200 L

Answer: C

- 93) In a chemistry class, 7 liters of a 4% silver iodide solution must be mixed with a 10% solution to get a 6% solution. How many liters of the 10% solution are needed?
A) 3.5 L B) 7 L C) 4.5 L D) 2.5 L

Answer: A

- 94) It is necessary to have a 40% antifreeze solution in the radiator of a certain car. The radiator now has 50 liters of 20% solution. How many liters of this should be drained and replaced with 100% antifreeze to get the desired strength?
A) 12.5 L B) 25 L C) 16.7 L D) 20 L

Answer: A

- 95) How much pure acid should be mixed with 3 gallons of a 50% acid solution in order to get an 80% acid solution?
A) 1.5 gal B) 12 gal C) 7.5 gal D) 4.5 gal

Answer: D

- 96) A chemist needs 120 milliliters of a 40% solution but has only 30% and 54% solutions available. Find how many milliliters of each that should be mixed to get the desired solution.
A) 80 mL of 30%; 40 mL of 54% B) 50 mL of 30%; 70 mL of 54%
C) 40 mL of 30%; 80 mL of 54% D) 70 mL of 30%; 50 mL of 54%

Answer: D

- 97) Mardi received an inheritance of \$60,000. She invested part at 1.25% and deposited the remainder in tax-free bonds at 2%. Her total annual income from the investments was \$825. Find the amount invested at 1.25%.
A) \$49,000 B) \$50,000 C) \$25,000 D) \$59,175

Answer: B

- 98) Walt made an extra \$8000 last year from a part-time job. He invested part of the money at 3% and the rest at 3.25%. He made a total of \$247.50 in interest. How much was invested at 3.25%?
A) \$4000 B) \$3000 C) \$6000 D) \$5000

Answer: B

- 99) Roberto invested some money at 2.5%, and then invested \$4000 more than twice this amount at 4%. His total annual income from the two investments was \$1735.00. How much was invested at 4%? 99) _____
 A) \$30,000 B) \$3400 C) \$12,000 D) \$34,000
 Answer: D
- 100) Helen Weller invested \$11,000 in an account that pays 1.5% simple interest. How much additional money must be invested in an account that pays 3% simple interest so that the average return on the two investments amounts to 2%? 100) _____
 A) \$7000 B) \$11,000 C) \$5500 D) \$8000
 Answer: C
- 101) Don James wants to invest \$55,000 to earn \$1336 per year. He can invest in B-rated bonds paying 3.8% per year or in a Certificate of Deposit (CD) paying 1.2% per year. How much money should be invested in each to realize exactly \$1336 in interest per year? 101) _____
 A) \$27,000 in B-rated bonds and \$28,000 in a CD
 B) \$29,000 in B-rated bonds and \$26,000 in a CD
 C) \$26,000 in B-rated bonds and \$29,000 in a CD
 D) \$28,000 in B-rated bonds and \$27,000 in a CD
 Answer: C
- 102) A bank loaned out \$57,000, part of it at the rate of 2.5% per year and the rest at a rate of 3.5% per year. If the interest received was \$1705.00, how much was loaned at 2.5%? 102) _____
 A) \$27,000 B) \$29,000 C) \$28,000 D) \$30,000
 Answer: B
- 103) Kevin invested part of his \$5000 bonus in a certificate of deposit that paid 2% annual simple interest, and the remainder in a mutual fund that paid 4% annual simple interest. If his total interest for that year was \$110, how much did Kevin invest in the mutual fund? 103) _____
 A) \$4879.00 B) \$500.00 C) \$610.00 D) \$4989.00
 Answer: B
- 104) A person's emotional quotient (EQ) is found by multiplying emotional age by 100 and dividing by chronological age. Using this information, if a 8 yr old person has an EQ of 92 what is that person's emotional age? 104) _____
 A) 8 years old B) 7.36 years old C) 20 years old D) 8.7 years old
 Answer: B
- 105) A toy company uses the linear model $y = -2x + 597$ to predict the decline in sales of a toy after it has been on the market more than one year. If x is the number of months after the first year and y is the number of toys sold in hundreds during that month, how many toys will be sold 9 months after the first year? 105) _____
 A) 57,900 toys B) 61,500 toys C) -118,500 toys D) -29,400 toys
 Answer: A

- 106) A computer company uses the linear model $y = -22x + 50,787$ to predict the decline in sales of a computer after it has been on the market more than one year. If x is the number of months after the first year and y is the number of computers sold during that month, how many computers will be sold 15 months after the first year? 106) _____
- A) 50,457 computers
B) 50,193 computers
C) 51,117 computers
D) 2308 computers

Answer: A

- 107) Your home state uses a linear model $y = 48(x - 70) + 5750$ to predict the number of vacationers (y) as compared to the average temperature for that week (x). Find the number of vacationers predicted for a week with an average temperature of 79 degrees. 107) _____
- A) 276,432 vacationers
B) 6182 vacationers
C) 12,902 vacationers
D) 9472 vacationers

Answer: B

Indicate whether the statement is true always, sometimes, or never.

- 108) A real number is a complex number. 108) _____
- A) Never
B) Sometimes
C) Always

Answer: C

- 109) A complex number is an imaginary number. 109) _____
- A) Never
B) Sometimes
C) Always

Answer: B

- 110) The sum of two imaginary numbers is an imaginary number. 110) _____
- A) Always
B) Never
C) Sometimes

Answer: C

- 111) The difference between two real numbers is a real number. 111) _____
- A) Always
B) Never
C) Sometimes

Answer: A

- 112) The product of two imaginary numbers is a real number. 112) _____
- A) Never
B) Always
C) Sometimes

Answer: C

- 113) The product of a pair of complex conjugates is a real number. 113) _____
- A) Always
B) Never
C) Sometimes

Answer: A

- 114) The product of a pair of complex conjugates (with $b \neq 0$) is the difference of the squares of the real and imaginary parts. 114) _____
- A) Sometimes
B) Always
C) Never

Answer: C

- 115) To find the quotient $\frac{3 + 7i}{3 - 7i}$, multiply numerator and denominator by $3 + 7i$. 115) _____
- A) Always
B) Never
C) Sometimes

Answer: A

116) When i is raised to an even power, the result is -1 . 116) _____
A) Never B) Sometimes C) Always

Answer: B

117) When i is raised to an odd power, the result is -1 . 117) _____
A) Sometimes B) Never C) Always

Answer: B

Identify the number as real, complex, pure imaginary, or nonreal complex. More than one of these descriptions may apply.

118) $-7 + i$ 118) _____
A) Complex
B) Complex, pure imaginary, nonreal complex
C) Nonreal complex
D) Real, complex

Answer: C

119) $5 + 8i$ 119) _____
A) Complex
B) Nonreal complex
C) Real, complex
D) Complex, pure imaginary, nonreal complex

Answer: B

120) 8 120) _____
A) Nonreal complex
B) Complex, pure imaginary, nonreal complex
C) Real, complex
D) Complex

Answer: C

121) -5 121) _____
A) Real, complex
B) Nonreal complex
C) Complex
D) Complex, pure imaginary, nonreal complex

Answer: A

122) 0 122) _____
A) Complex, pure imaginary, nonreal complex
B) Nonreal complex
C) Complex
D) Real, complex

Answer: D

123) π 123) _____
A) Real, complex
B) Nonreal complex
C) Complex
D) Complex, pure imaginary, nonreal complex

Answer: A

124) $\sqrt{9}$ 124) _____
A) Nonreal complex
B) Complex, pure imaginary, nonreal complex
C) Real, complex
D) Complex

Answer: C

125) $\sqrt{-7}$ 125) _____
A) Nonreal complex
B) Complex, pure imaginary, nonreal complex
C) Complex
D) Real, complex

Answer: B

Write the number as the product of a real number and i.

126) $\sqrt{-49}$ 126) _____
A) $-i\sqrt{49}$ B) $7\sqrt{i}$ C) $-7i$ D) $7i$

Answer: D

127) $-\sqrt{-9}$ 127) _____
A) 3 B) $-3i$ C) $3i$ D) $i\sqrt{9}$

Answer: B

128) $\sqrt{-3}$ 128) _____
A) $i\sqrt{-3}$ B) $i\sqrt{3}$ C) $-i\sqrt{3}$ D) $\sqrt{3}i$

Answer: B

129) $\sqrt{-99}$ 129) _____
A) $3i\sqrt{11}$ B) $-3\sqrt{11}i$ C) $3\sqrt{11}i$ D) $-3i\sqrt{11}$

Answer: A

Multiply or divide, as indicated. Simplify the answer.

130) $\sqrt{-17} \cdot \sqrt{-17}$ 130) _____
A) $17i$ B) 17 C) -17 D) $-17i$

Answer: C

131) $\frac{\sqrt{-128}}{\sqrt{-8}}$ 131) _____
A) -4 B) $-4i$ C) 4 D) $4i$

Answer: C

132) $\frac{\sqrt{-75}}{\sqrt{3}}$ 132) _____
A) -5 B) $5i$ C) 5 D) $-5i$

Answer: B

133) $\frac{\sqrt{-3}}{\sqrt{-12}}$ 133) _____
 A) $-\frac{1}{2}$ B) $\frac{1}{2i}$ C) $\frac{1}{2}$ D) $-\frac{1}{2}i$

Answer: C

134) $\frac{\sqrt{-8}}{\sqrt{72}}$ 134) _____
 A) $\frac{1}{3}i$ B) $\frac{1}{3}$ C) $-\frac{1}{3}$ D) $-\frac{1}{3}i$

Answer: A

135) $\frac{\sqrt{-20} \cdot \sqrt{-5}}{\sqrt{4}}$ 135) _____
 A) 5 B) 5i C) -5i D) -5

Answer: D

Write the number in standard form a + bi.

136) $\frac{6 - \sqrt{-20}}{2}$ 136) _____
 A) $3 - i\sqrt{10}$ B) $3 - i\sqrt{5}$ C) $3 - 2i\sqrt{5}$ D) $3 + i\sqrt{10}$

Answer: B

137) $\frac{-6 + \sqrt{-108}}{2}$ 137) _____
 A) $-3 - 6i\sqrt{3}$ B) $-3 - 6i\sqrt{6}$ C) $-3 + 3i\sqrt{6}$ D) $-3 + 3i\sqrt{3}$

Answer: D

138) $\frac{-5 + \sqrt{-75}}{25}$ 138) _____
 A) $-\frac{1}{5} + \frac{3\sqrt{5}}{5}i$ B) $-\frac{1}{5} + \frac{5\sqrt{3}}{5}i$ C) $-\frac{1}{5} + \frac{\sqrt{3}}{5}i$ D) $-\frac{1}{5} + \frac{\sqrt{3}}{25}i$

Answer: C

Find the sum or difference. Write the answer in standard form.

139) $(8 - 9i) + (7 + 5i)$ 139) _____
 A) $15 + 4i$ B) $1 + 14i$ C) $-15 + 4i$ D) $15 - 4i$

Answer: D

140) $4i + (-7 - i)$ 140) _____
 A) $-7 + 3i$ B) $7 - 5i$ C) $7 - 3i$ D) $-7 + 5i$

Answer: A

141) $(5 + 4i) - (-4 + i)$ 141) _____
 A) $-9 - 3i$ B) $9 - 3i$ C) $9 + 3i$ D) $1 + 5i$

Answer: C

142) $(-3 + 4i) - 6$ 142) _____
 A) $9 - 4i$ B) $3 - 4i$ C) $3 + 4i$ D) $-9 + 4i$
 Answer: D

143) $(9 - 4i) + (6 + 8i) + 5i$ 143) _____
 A) $20 + 9i$ B) $15 - 9i$ C) $3 + 4i$ D) $15 + 9i$
 Answer: D

144) $9i + (-9 - i)$ 144) _____
 A) $-9 + 8i$ B) $9 - 10i$ C) $9 - 8i$ D) $-9 + 10i$
 Answer: A

145) $(2 - 9i) - (-1 - 2i) - (-2 - 3i)$ 145) _____
 A) $5 - 14i$ B) $1 - 10i$ C) $-1 - 14i$ D) $5 - 4i$
 Answer: D

146) $(1 + 3i) - (-3 - 8i) + (9 - 9i)$ 146) _____
 A) $-13 + 20i$ B) $13 + 2i$ C) $7 - 14i$ D) $13 - 14i$
 Answer: B

147) $i\sqrt{5} + 5 - (1 + 9i\sqrt{5}) - (2 - i\sqrt{5})$ 147) _____
 A) $-2 - 11i\sqrt{5}$ B) $2 - 7i\sqrt{5}$ C) $2 - 11i\sqrt{5}$ D) $2 + 7i\sqrt{5}$
 Answer: B

148) $7\sqrt{2} - (2\sqrt{2} + i) + 5i - (-3\sqrt{2} + 5i)$ 148) _____
 A) $8\sqrt{2} + i$ B) $8 - 9i\sqrt{2}$ C) $8\sqrt{2} - i$ D) $-8 - 9i\sqrt{2}$
 Answer: C

Find the product. Write the answer in standard form.

149) $4i(8 - 5i)$ 149) _____
 A) $32i - 20$ B) $32i + 20i^2$ C) $-32i - 20i^2$ D) $20 + 32i$
 Answer: D

150) $(6 - 5i)(2 + 8i)$ 150) _____
 A) $52 - 38i$ B) $52 + 38i$ C) $-28 - 58i$ D) $-40i^2 + 38i - 12$
 Answer: B

151) $(3 - 5i)(4 - 4i)$ 151) _____
 A) $-8 + 32i$ B) $-8 - 32i$ C) $20i^2 - 32i + 12$ D) $32 - 8i$
 Answer: B

152) $(8 - 3i)^2$ 152) _____
 A) $55 + 48i$ B) $73 - 48i$ C) $73 + 48i$ D) $55 - 48i$
 Answer: D

153) $i(6 - 2i)(4 - 5i)$ 153) _____
 A) $-38 - 14i$ B) $38 + 14i$ C) $34 + 22i$ D) $10i^3 + 38i^2 + 24i$
 Answer: B

154) $(-4 - 4i)(-4 + 4i)$ 154) _____
 A) $16 - 16i^2$ B) 0 C) 32 D) $16 + 16i^2$
 Answer: C

155) $(1 + 3i)^3$ 155) _____
 A) $i^3 + 27i^2 + 9i + a^3$ B) $-26 + 26i$
 C) $-26 + 9i + i^3$ D) $-26 - 18i$
 Answer: D

156) $-3i(2 - 6i)^2$ 156) _____
 A) $-72i + 72i^2 - 108i^3$ B) 96i
 C) $-72 + 96i$ D) $96 + 72i$
 Answer: C

157) $(\sqrt{5} + 3i)(\sqrt{5} - 3i)$ 157) _____
 A) 14 B) 2 C) $5 - 9i$ D) $5 + 9i$
 Answer: A

158) $(2 + i)(2 - i)(6 + 4i)$ 158) _____
 A) $18 + 12i$ B) $30 + 4i$ C) $30 + 20i$ D) $24 - 4i^3$
 Answer: C

Find the quotient. Write the answer in standard form.

159) $\frac{6 + 2i}{6 - 9i}$ 159) _____
 A) $-\frac{2}{15} + \frac{22}{45}i$ B) $-\frac{6}{5} + \frac{22}{45}i$ C) $\frac{2}{13} + \frac{22}{39}i$ D) $\frac{18}{13} + \frac{14}{13}i$
 Answer: C

160) $\frac{1 + 3i}{5 + 6i}$ 160) _____
 A) $-\frac{13}{61} - \frac{21}{61}i$ B) $\frac{23}{61} + \frac{9}{61}i$ C) $-\frac{23}{11} + \frac{9}{11}i$ D) $\frac{13}{11} + \frac{9}{11}i$
 Answer: B

161) $\frac{7 - 9i}{5 + 3i}$ 161) _____
 A) $\frac{62}{17} + \frac{24}{17}i$ B) $\frac{31}{8} + \frac{33}{16}i$ C) $\frac{4}{17} - \frac{33}{17}i$ D) $\frac{1}{4} + \frac{33}{16}i$
 Answer: C

162) $\frac{2 - 5i}{5 - 6i}$ 162) _____
 A) $-\frac{20}{61} + \frac{37}{61}i$ B) $-\frac{40}{11} - \frac{13}{11}i$ C) $\frac{40}{61} - \frac{13}{61}i$ D) $\frac{20}{11} - \frac{13}{11}i$
 Answer: C

163) $\frac{9 + 2i}{3 - 5i}$ 163) _____
 A) $\frac{37}{2} + \frac{39}{2}i$ B) $-\frac{1}{16} + \frac{3}{16}i$ C) $-\frac{37}{16} + \frac{3}{16}i$ D) $\frac{1}{2} + \frac{3}{2}i$

Answer: D

164) $\frac{2 + 8i}{9 + 8i}$ 164) _____
 A) $\frac{82}{17} - \frac{56}{17}i$ B) $-\frac{46}{17} - \frac{56}{17}i$ C) $\frac{82}{145} + \frac{56}{145}i$ D) $-\frac{46}{145} - \frac{88}{145}i$

Answer: C

165) $\frac{8 - 9i}{8 + 4i}$ 165) _____
 A) $5 + 2i$ B) $\frac{7}{48} + \frac{13}{24}i$ C) $\frac{25}{12} + \frac{13}{24}i$ D) $\frac{7}{20} - \frac{13}{10}i$

Answer: D

166) $\frac{-11}{-i}$ 166) _____
 A) $-11i$ B) -11 C) 11 D) $11i$

Answer: A

167) $\frac{11}{-i}$ 167) _____
 A) $-11i$ B) $11i$ C) 11 D) -11

Answer: B

168) $\frac{2}{11i}$ 168) _____
 A) $\frac{2}{11}$ B) $-\frac{2}{11}i$ C) $-\frac{2}{11}$ D) $\frac{2}{11}i$

Answer: B

Simplify the power of i.

169) i^{76} 169) _____
 A) -1 B) i C) 1 D) $-i$

Answer: C

170) i^{94} 170) _____
 A) -1 B) $-i$ C) 1 D) i

Answer: A

171) i^{53} 171) _____
 A) 1 B) i C) -1 D) $-i$

Answer: B

182) $x^2 - 4x - 32 = 0$ A) $\{-8, 4\}$ B) $\{-28, -4\}$ C) $\{6, -6\}$ D) $\{8, -4\}$ 182) _____
 Answer: D

183) $28x^2 + 41x + 15 = 0$ A) $\left\{-\frac{5}{7}, -\frac{3}{4}\right\}$ B) $\left\{\frac{7}{5}, \frac{4}{3}\right\}$ C) $\left\{\frac{5}{7}, \frac{3}{4}\right\}$ D) $\left\{-\frac{7}{5}, -\frac{3}{4}\right\}$ 183) _____
 Answer: A

184) $x^2 + 14x + 40 = 0$ A) $\{2\sqrt{10}, -2\sqrt{10}\}$ B) $\{4, 10\}$ C) $\{-20, -8\}$ D) $\{-10, -4\}$ 184) _____
 Answer: D

185) $8x^2 + 2x - 6 = 0$ A) $\left\{\frac{4}{3}, 0\right\}$ B) $\left\{\frac{4}{3}, -1\right\}$ C) $\left\{\frac{4}{3}, 1\right\}$ D) $\left\{\frac{3}{4}, -1\right\}$ 185) _____
 Answer: D

Solve the problem.

186) Which one of the following equations is set up for direct use of the square root property? 186) _____
 A) $4x^2 + 7x - 8 = 0$ B) $(4x + 7)(x - 8) = 0$
 C) $x^2 + x = 8$ D) $(4x + 7)^2 = 8$
 Answer: D

Solve the equation by the square root property.

187) $x^2 = 49$ A) $\{24.5\}$ B) $\{\pm 7\}$ C) $\{\pm 7i\}$ D) $\{7\}$ 187) _____
 Answer: B

188) $x^2 = -225$ A) $\{112.5\}$ B) $\{15\}$ C) $\{\pm 15i\}$ D) $\{\pm 15\}$ 188) _____
 Answer: C

189) $x^2 = 12$ A) $\{\sqrt{12}\}$ B) $\{144\}$ C) $\{\pm 2\sqrt{3}\}$ D) $\{6\}$ 189) _____
 Answer: C

190) $(x - 15)^2 = 64$ A) $\{23\}$ B) $\{-49\}$ C) $\{7, 23\}$ D) $\{-7, -23\}$ 190) _____
 Answer: C

191) $(x - 1)^2 = 5$ A) $\{\sqrt{5} - 1, -\sqrt{5} - 1\}$ B) $\{1 + \sqrt{5}\}$ 191) _____
 C) $\{\sqrt{5} - \sqrt{-1}\}$ D) $\{1 \pm \sqrt{5}\}$
 Answer: D

192) $(6x + 9)^2 = 16$

A) $\left\{-\frac{5}{6}, -\frac{13}{6}\right\}$

B) $\left\{-\frac{5}{6}, 0\right\}$

C) $\left\{\frac{5}{6}, \frac{13}{6}\right\}$

D) $\left\{\frac{7}{6}\right\}$

192) _____

Answer: A

193) $(2x + 3)^2 = 14$

A) $\{-3 \pm \sqrt{14}\}$

B) $\left\{\frac{-3 \pm \sqrt{14}}{2}\right\}$

C) $\left\{\pm \frac{\sqrt{3}}{2}i\right\}$

D) $\left\{\frac{-3 \pm \sqrt{14}}{2}\right\}$

193) _____

Answer: B

194) $(x + 9)^2 = -5$

A) $\{-3 - \sqrt{5}\}$

B) $\{-9 \pm \sqrt{5}\}$

C) $\{-9 \pm i\sqrt{5}\}$

D) $\{-4, 14\}$

194) _____

Answer: C

Solve the problem.

195) Only one of the following equations does not require Step 1 of the method for completing the square. Which one is it?

195) _____

A) $(4x + 7)(x - 7) = 0$

B) $x^2 + x = 7$

C) $4x^2 + 7x - 7 = 0$

D) $(4x + 7)^2 = 7$

Answer: B

Solve the equation by completing the square.

196) $x^2 - 4x - 45 = 0$

A) $\{\pm 3i\sqrt{5}\}$

B) $\{-40, -5\}$

C) $\{9, -5\}$

D) $\{-9, 5\}$

196) _____

Answer: C

197) $x^2 + 3x - 9 = 0$

A) $\left\{\frac{-3 \pm 3\sqrt{5}}{2}\right\}$

B) $\{-3 \pm 3\sqrt{5}\}$

C) $\left\{\frac{-3 - 3\sqrt{5}}{2}\right\}$

D) $\left\{\frac{-3 + 3\sqrt{5}}{2}\right\}$

197) _____

Answer: A

198) $x^2 + 4x + 68 = 0$

A) $\{6, -10\}$

B) $\{-2 \pm 8i\}$

C) $\{2 \pm 8i\}$

D) $\{-2 \pm 2\sqrt{17}\}$

198) _____

Answer: B

199) $2x^2 + 7x + 3 = 0$

A) $\left\{-3, -\frac{1}{2}\right\}$

B) $\left\{-2 \pm \frac{\sqrt{3}}{2}i\right\}$

C) $\{3, -1\}$

D) $\left\{\frac{-7 \pm 2\sqrt{6}}{4}\right\}$

199) _____

Answer: A

200) $4x^2 - 2x - 6 = 0$

A) $\left\{\frac{2}{3}, 0\right\}$

B) $\left\{\frac{2}{3}, 1\right\}$

C) $\left\{\frac{2}{3}, -1\right\}$

D) $\left\{\frac{3}{2}, -1\right\}$

200) _____

Answer: D

201) $x^2 + 10x = -21$ 201) _____
 A) $\{-3, -7\}$ B) $\{3, -7\}$ C) $\{-3, 7\}$ D) $\{3, 7\}$
 Answer: A

202) $x^2 + 8x = 3$ 202) _____
 A) $\{-4 \pm 1\sqrt{19}\}$ B) $\{4 + \sqrt{19}\}$ C) $\{-1 \pm \sqrt{19}\}$ D) $\{-4 \pm \sqrt{19}\}$
 Answer: D

203) $5x^2 - 7x = 1$ 203) _____
 A) $\left\{-\frac{7}{10} \pm \frac{\sqrt{69}}{10}i\right\}$ B) $\left\{\frac{-7 \pm \sqrt{69}}{10}\right\}$ C) $\left\{\frac{7}{10} \pm \frac{\sqrt{69}}{10}i\right\}$ D) $\left\{\frac{7 \pm \sqrt{69}}{10}\right\}$
 Answer: D

204) $8x^2 + 7x = -2$ 204) _____
 A) $\left\{\frac{-7 \pm \sqrt{15}}{16}\right\}$ B) $\left\{\frac{7 \pm \sqrt{15}}{16}\right\}$ C) $\left\{\frac{7}{16} \pm \frac{\sqrt{15}}{16}i\right\}$ D) $\left\{-\frac{7}{16} \pm \frac{\sqrt{15}}{16}i\right\}$
 Answer: D

205) $x^2 = 3 - 8x$ 205) _____
 A) $\{4 + \sqrt{19}\}$ B) $\{-1 \pm \sqrt{19}\}$ C) $\{-4 \pm 2\sqrt{19}\}$ D) $\{-4 \pm \sqrt{19}\}$
 Answer: D

Solve the equation using the quadratic formula.

206) $x^2 - 14x + 74 = 0$ 206) _____
 A) $\{12, 2\}$ B) $\{-7 \pm 5i\}$ C) $\{7 \pm 5i\}$ D) $\{14 \pm 10i\}$
 Answer: C

207) $x^2 + x + 4 = 0$ 207) _____
 A) $\left\{\frac{1}{2} \pm \frac{\sqrt{15}}{2}i\right\}$ B) $\left\{\frac{-1 \pm \sqrt{15}}{2}\right\}$
 C) $\left\{\frac{1 \pm \sqrt{15}}{2}\right\}$ D) $\left\{-\frac{1}{2} \pm \frac{\sqrt{15}}{2}i\right\}$
 Answer: D

208) $6x^2 + 12x + 1 = 0$ 208) _____
 A) $\left\{\frac{-6 \pm \sqrt{42}}{6}\right\}$ B) $\left\{\frac{-12 \pm \sqrt{30}}{6}\right\}$ C) $\left\{\frac{-6 \pm \sqrt{30}}{12}\right\}$ D) $\left\{\frac{-6 \pm \sqrt{30}}{6}\right\}$
 Answer: D

209) $2x^2 + 12x = -5$ 209) _____
 A) $\left\{\frac{-6 \pm \sqrt{26}}{4}\right\}$ B) $\left\{\frac{-6 \pm \sqrt{26}}{2}\right\}$ C) $\left\{\frac{-12 \pm \sqrt{26}}{2}\right\}$ D) $\left\{\frac{-6 \pm \sqrt{46}}{2}\right\}$
 Answer: B

210) $5x^2 = -12x - 1$ 210) _____
 A) $\left\{ \frac{-6 \pm \sqrt{41}}{5} \right\}$ B) $\left\{ \frac{-6 \pm \sqrt{31}}{10} \right\}$ C) $\left\{ \frac{-12 \pm \sqrt{31}}{5} \right\}$ D) $\left\{ \frac{-6 \pm \sqrt{31}}{5} \right\}$

Answer: D

211) $\frac{4}{9}x^2 - \frac{4}{3}x = -1$ 211) _____
 A) $\left\{ \frac{3}{2} \right\}$ B) $\left\{ \frac{3 \pm 2\sqrt{2}}{2} \right\}$ C) $\left\{ \frac{2}{3} \right\}$ D) $\left\{ -\frac{3}{2} \right\}$

Answer: A

212) $5 = -\frac{12}{x} - \frac{1}{x^2}$ 212) _____
 A) $\left\{ \frac{-6 \pm \sqrt{41}}{5} \right\}$ B) $\left\{ \frac{-6 \pm \sqrt{31}}{10} \right\}$ C) $\left\{ \frac{-12 \pm \sqrt{31}}{5} \right\}$ D) $\left\{ \frac{-6 \pm \sqrt{31}}{5} \right\}$

Answer: D

213) $(x + 2)(x - 9) = 8$ 213) _____
 A) $\left\{ \frac{-7 \pm 3\sqrt{17}}{2} \right\}$ B) $\left\{ -\frac{7}{2} \pm \frac{3i\sqrt{17}}{2} \right\}$ C) $\left\{ \frac{7}{2} \pm \frac{3i\sqrt{17}}{2} \right\}$ D) $\left\{ \frac{7 \pm 3\sqrt{17}}{2} \right\}$

Answer: D

214) $(2x - 1)(x + 1) = 3$ 214) _____
 A) $\left\{ \frac{1 \pm \sqrt{33}}{2} \right\}$ B) $\left\{ \frac{-1 \pm \sqrt{57}}{2} \right\}$ C) $\left\{ \frac{1 \pm \sqrt{33}}{4} \right\}$ D) $\left\{ \frac{-1 \pm \sqrt{33}}{4} \right\}$

Answer: D

Solve the cubic equation using factoring and the quadratic formula.

215) $x^3 + 1 = 0$ 215) _____
 A) $\left\{ -1, \frac{1}{2} \pm \frac{\sqrt{3}}{2}i \right\}$ B) $\{-1, \pm i\}$ C) $\{-1, 1 \pm i\sqrt{3}\}$ D) $\{-1, -1 \pm i\sqrt{3}\}$

Answer: A

216) $x^3 - 1 = 0$ 216) _____
 A) $\{1, 1 \pm i\sqrt{3}\}$ B) $\{1, \pm i\}$ C) $\{1, -1 \pm i\sqrt{3}\}$ D) $\left\{ 1, -\frac{1}{2} \pm \frac{\sqrt{3}}{2}i \right\}$

Answer: D

217) $x^3 + 8 = 0$ 217) _____
 A) $\{-2, -1 \pm \sqrt{5}\}$ B) $\{-2, 1 \pm i\sqrt{3}\}$ C) $\{-2, \pm 2i\}$ D) $\{-2, 1 \pm i\sqrt{6}\}$

Answer: B

218) $x^3 - 8 = 0$ 218) _____
 A) $\{2, 1 \pm i\sqrt{6}\}$ B) $\{2, \pm 2i\}$ C) $\{2, -1 \pm i\sqrt{3}\}$ D) $\{2, -1 \pm \sqrt{5}\}$

Answer: C

219) $x^3 + 64 = 0$ 219) _____
 A) $\{-4, 2 \pm 2i\sqrt{3}\}$ B) $\{-4, -2 \pm 2i\sqrt{6}\}$ C) $\{-4, -2 \pm 2i\}$ D) $\{-4, 2 \pm 2i\sqrt{5}\}$
 Answer: A

220) $x^3 - 64 = 0$ 220) _____
 A) $\{4, 2 \pm 2\sqrt{5}\}$ B) $\{4, -2 \pm 2i\sqrt{3}\}$ C) $\{4, -2 \pm 2i\}$ D) $\{4, 2 \pm 2i\sqrt{6}\}$
 Answer: B

Solve the equation.

221) $x^2 = 9$ 221) _____
 A) $\pm i\sqrt{3}$ B) $\pm\sqrt{3}$ C) $\pm 3i$ D) ± 3
 Answer: D

222) $x^2 = -49$ 222) _____
 A) ± 7 B) $\pm i\sqrt{7}$ C) $\pm\sqrt{7}$ D) $\pm 7i$
 Answer: D

223) $x^2 - 13 = 0$ 223) _____
 A) $\pm\sqrt{13}$ B) ± 13 C) $\pm i\sqrt{13}$ D) $\pm 13i$
 Answer: A

224) $x^2 + 10 = 0$ 224) _____
 A) $\pm 10i$ B) $\pm\sqrt{10}$ C) $\pm i\sqrt{10}$ D) ± 10
 Answer: C

225) $x^2 = 28$ 225) _____
 A) $\pm 2\sqrt{7}$ B) $\pm 4i\sqrt{7}$ C) $\pm 4\sqrt{7}$ D) $\pm 2i\sqrt{7}$
 Answer: A

226) $x^2 = -8$ 226) _____
 A) $\pm 2\sqrt{2}$ B) $\pm 4\sqrt{2}$ C) $\pm 2i\sqrt{2}$ D) $\pm 4i\sqrt{2}$
 Answer: C

227) $x - 10 = 0$ 227) _____
 A) ± 10 B) 10 C) -10 D) $\sqrt{10}$
 Answer: B

228) $x + 7 = 0$ 228) _____
 A) $i\sqrt{7}$ B) $-i\sqrt{7}$ C) -7 D) 7
 Answer: C

Solve the problem.

229) Only one of the following equations is set up so that the values of a, b, and c can be determined immediately. Which one is it? 229) _____

- A) $2x^2 + 7x + 1 = 0$ B) $x^2 + x = 1$
 C) $(2x + 7)(x + 1) = 0$ D) $(2x + 7)^2 = 1$

Answer: A

Solve the equation for the indicated variable. Assume no denominator is 0.

230) $M = \pi r^2 h d$, for r 230) _____
 A) $r = \frac{\pm\sqrt{M\pi h d}}{\pi h d}$ B) $r = \frac{\pm\sqrt{\pi M h d}}{h d}$ C) $r = \pm\sqrt{\pi M h d}$ D) $r = \frac{\pm M\sqrt{\pi h d}}{\pi h d}$

Answer: A

231) $A = 3\pi a^2$, for a 231) _____
 A) $a = \sqrt{3\pi A}$ B) $a = \frac{\pm\sqrt{3\pi A}}{3\pi}$ C) $a = \frac{\pm\sqrt{A\pi}}{3}$ D) $a = \frac{\pm A\sqrt{3\pi}}{3\pi}$

Answer: B

232) $Ve = \frac{1}{2}mv^2$, for v 232) _____
 A) $v = \pm 2\frac{\sqrt{Ve}}{m}$ B) $v = \pm\sqrt{2Ve}$ C) $v = \frac{\pm\sqrt{2mVe}}{m}$ D) $v = \pm\sqrt{\frac{Ve}{2m}}$

Answer: C

233) $rm = t^2 - mt$, for t 233) _____
 A) $t = \sqrt{mr - m}$ B) $t = \frac{m \pm \sqrt{m^2 - 4mr}}{4}$
 C) $t = \frac{m \pm \sqrt{m^2 + 4mr}}{2}$ D) $t = \frac{m \pm \sqrt{m^2 + 4mr}}{2m}$

Answer: C

234) $2x^2 - 4xy + 3y^2 = 1$, for x 234) _____
 A) $x = \frac{2y \pm \sqrt{2 - 2y^2}}{2}$ B) $x = y \pm (1 - y)$
 C) $x = -y \pm \sqrt{1 - y^2}$ D) $x = -y \pm 2\sqrt{1 - y^2}$

Answer: A

235) $2x^2 - 4xy + 3y^2 = 1$, for y 235) _____
 A) $y = \frac{2x \pm \sqrt{6 - 4x^2}}{3}$ B) $y = \frac{2x \pm \sqrt{3 - 2x^2}}{3}$
 C) $y = \frac{2x \pm 4\sqrt{3 - 2x^2}}{3}$ D) $y = \frac{2x \pm 2\sqrt{3 - 2x^2}}{3}$

Answer: B

Evaluate the discriminant for the equation. Then use it to predict the number of distinct solutions, and whether they are rational, irrational, or nonreal complex.

236) $s^2 - 6s + 5 = 0$ 236) _____
 A) One rational solution (a double solution) B) Two distinct nonreal complex solutions
 C) Two distinct irrational solutions D) Two distinct rational solutions

Answer: D

237) $t^2 + 6t + 9 = 0$ 237) _____
 A) Two distinct irrational solutions B) Two distinct rational solutions
 C) One rational solution (a double solution) D) Two distinct nonreal complex solutions
 Answer: C

238) $v^2 - 7v + 7 = 0$ 238) _____
 A) Two distinct irrational solutions B) Two distinct nonreal complex solutions
 C) Two distinct rational solutions D) One rational solution (a double solution)
 Answer: A

239) $w^2 - 2w + 6 = 0$ 239) _____
 A) One rational solution (a double solution) B) Two distinct rational solutions
 C) Two distinct irrational solutions D) Two distinct nonreal complex solutions
 Answer: D

240) $25x^2 - 10x + 1 = 0$ 240) _____
 A) Two distinct rational solutions B) Two distinct nonreal complex solutions
 C) One rational solution (a double solution) D) Two distinct irrational solutions
 Answer: C

241) $5y^2 = -4y - 5$ 241) _____
 A) Two distinct irrational solutions B) Two distinct rational solutions
 C) One rational solution (a double solution) D) Two distinct nonreal complex solutions
 Answer: D

242) $8 + 3z^2 = 3z$ 242) _____
 A) Two distinct irrational solutions B) One rational solution (a double solution)
 C) Two distinct nonreal complex solutions D) Two distinct rational solutions
 Answer: C

243) $-5 - 5a^2 = -7a - 7$ 243) _____
 A) Two distinct nonreal complex solutions B) Two distinct rational solutions
 C) One rational solution (a double solution) D) Two distinct irrational solutions
 Answer: D

Find the values of a, b, and c for which the quadratic equation $ax^2 + bx + c = 0$ has the given numbers as solutions. Then use those values to write a quadratic equation.

244) 4, 2 244) _____
 A) $x^2 + 8x - 6 = 0$ B) $x^2 + 8x + 6 = 0$ C) $x^2 - 6x + 8 = 0$ D) $x^2 + 6x + 8 = 0$
 Answer: C

245) -9, -2 245) _____
 A) $x^2 + 11x + 18 = 0$ B) $x^2 + 18x - 11 = 0$
 C) $x^2 - 11x + 18 = 0$ D) $x^2 + 18x + 11 = 0$
 Answer: A

- 246) 5, -8
 A) $x^2 + 3x - 40 = 0$ B) $x^2 - 40x + 3 = 0$ C) $x^2 - 3x - 40 = 0$ D) $x^2 - 40x - 3 = 0$ 246) _____
 Answer: A
- 247) -5, 7
 A) $x^2 + 2x - 35 = 0$ B) $x^2 - 35x + 2 = 0$ C) $x^2 - 35x - 2 = 0$ D) $x^2 - 2x - 35 = 0$ 247) _____
 Answer: D
- 248) $-8 + \sqrt{13}$, $-8 - \sqrt{13}$
 A) $x^2 - 16x + 51 = 0$ B) $x^2 + 64x + 77 = 0$ 248) _____
 C) $x^2 + 16x + 77 = 0$ D) $x^2 + 16x + 51 = 0$
 Answer: D
- 249) $5 + 4\sqrt{2}$, $5 - 4\sqrt{2}$
 A) $x^2 - 10x - 7 = 0$ B) $x^2 + 7x + 10 = 0$ 249) _____
 C) $x^2 - 5x + 17 = 0$ D) $x^2 - 25x + 57 = 0$
 Answer: A
- 250) $2i$, $-2i$
 A) $x^2 - 4 = 0$ B) $x^2 + 4 + 4 = 0$ C) $x^2 - 4 - 4 = 0$ D) $x^2 + 4 = 0$ 250) _____
 Answer: D
- 251) $29i$, $-29i$
 A) $x^2 + 841 = 0$ B) $x^2 + 58 + 841 = 0$ 251) _____
 C) $x^2 - 841 = 0$ D) $x^2 - 58 - 841 = 0$
 Answer: A
- Solve the problem.**
- 252) Find two consecutive integers whose product is 6. 252) _____
 A) 2, 3 B) -2, -3 C) 2, 3 or -2, -3 D) 2, -3
 Answer: C
- 253) Find two consecutive even integers whose product is 1088. 253) _____
 A) 32, 34 B) 32, -34
 C) 32, 34 or -32, -34 D) -32, -34
 Answer: C
- 254) Find two consecutive odd integers whose product is 3. 254) _____
 A) 1, 3 B) -1, -3 C) 1, 3 or -1, -3 D) 1, -3
 Answer: C
- 255) The sum of the squares of two consecutive integers is 365. Find the integers. 255) _____
 A) 13, 14 B) -13, -14
 C) 13, 14 or -13, -14 D) 13, -14
 Answer: C

- 256) The sum of the squares of two consecutive even integers is 20. Find the integers. 256) _____
 A) 3, -5 B) -2, -4 C) 2, 4 D) 2, 4 or -2, -4

Answer: D

- 257) The sum of the squares of two consecutive odd integers is 970. Find the integers. 257) _____
 A) 21, -23 B) 21, 23
 C) 21, 23 or -21, -23 D) -21, -23

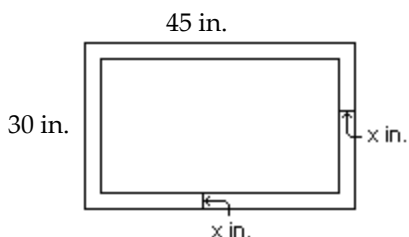
Answer: C

- 258) The difference of the squares of two positive consecutive even integers is 124. Find the integers. 258) _____
 A) 28, 26 B) 32, 34 C) 30, 32 D) 30, 28

Answer: C

Answer the question.

- 259) The mat around the picture shown measures x inches across. Which one of the following equations says that the area of the picture itself is 900 square inches? 259) _____



- A) $(45 - 2x)(30 - 2x) = 900$ B) $2(45 - 2x) + 2(30 - 2x) = 900$
 C) $(45 - x)(30 - x) = 900$ D) $(45)(30) - x^2 = 900$

Answer: A

Solve the problem.

- 260) The length of a rectangle is 10 inches more than its width. If 5 inches are taken from the length and added to the width, the figure becomes a square with an area of 121 square inches. What are the dimensions of the original figure? 260) _____
 A) 1 in. by 11 in. B) 6 in. by 16 in. C) 6 in. by 11 in. D) 11 in. by 11 in.

Answer: B

- 261) The outside of a picture frame has a length which is 6 cm more than width. The area enclosed by the outside of the picture frame is 72 square cm. Find the width of the outside of the picture frame. 261) _____
 A) 18 cm B) 12 cm C) 6 cm D) 8 cm

Answer: C

- 262) The area of a square is numerically 60 more than the perimeter. Find the length of the side. 262) _____
 A) 10 units B) 200 units C) 40 units D) 50 units

Answer: A

- 263) The area of a square is numerically 4 less than the perimeter. Find the length of the side, if the side is greater than 1. 263) _____
 A) 8 units B) 9 units C) 5 units D) 2 units

Answer: D

- 264) The height of a box is 3 inches. The length is three inches more than the width. Find the width if the volume is 264. 264) _____
 A) 11 in. B) 3 in. C) 8 in. D) 88 in.

Answer: C

- 265) The height of a box is 10 inches. Its length is 4 inches more than its width. Find the length if the volume is 450. 265) _____
 A) 9 in. B) 5 in. C) 10 in. D) 45 in.

Answer: A

- 266) A 11 m by 16 m rectangular garden is to have a gravel path of uniform width bordering it. How wide is the path if the total area covered by the garden and path is 456 m²? 266) _____
 A) 4 m B) 5.5 m C) 5 m D) 3 m

Answer: A

- 267) A rug is to fit in a room so that a border of even width is left on all four sides. If the room is 12 feet by 15 feet and the area of the rug is 108 square feet, how wide will the border be? 267) _____
 A) 3 ft B) 1 ft C) 2.2 ft D) 1.5 ft

Answer: D

- 268) A can has a surface area of 939 square inches. Its height is 6.64 inches. What is the radius of the circular top? Round to the nearest hundredth. 268) _____
 A) 9.35 in. B) 11.88 in. C) 4.42 in. D) 22.51 in.

Answer: A

- 269) A square lawn has an area of 2450 square feet. A sprinkler placed at the center of the lawn sprays a water in a circular pattern that just covers the lawn. What is the radius of the circle? 269) _____
 A) 24.75 ft B) 70 ft C) 35 ft D) 49.5 ft

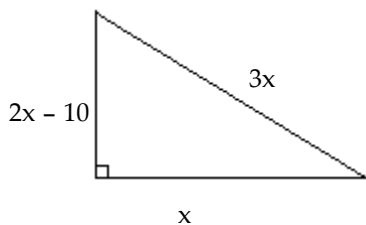
Answer: C

Answer the question.

- 270) If a rectangle is x feet long and y feet wide, which one of the following expressions is the length of its diagonal in terms of x and y? 270) _____
 A) $x^2 + y^2$ B) $\sqrt{x + y}$ C) $\sqrt{x^2 + y^2}$ D) $x + y$

Answer: C

- 271) To solve for the lengths of the right triangle sides, which equation is correct? 271) _____



- A) $(2x - 10)^2 + x^2 = (3x)^2$ B) $x^2 + (3x)^2 = (2x - 10)^2$
 C) $x^2 = (3x)^2 + (2x - 10)^2$ D) $(2x - 10)^2 = x^2 + (3x)^2$

Answer: A

Solve the problem.

- 272) Two cars leave an intersection. One car travels north; the other east. When the car traveling north had gone 18 mi, the distance between the cars was 6 mi more than the distance traveled by the car heading east. How far had the east bound car traveled? 272) _____

A) 30 mi B) 36 mi C) 24 mi D) 18 mi

Answer: C

- 273) A ladder is resting against a wall. The top of the ladder touches the wall at a height of 6 ft. Find the length of the ladder if the length is 2 ft more than its distance from the wall. 273) _____

A) 8 ft B) 10 ft C) 6 ft D) 12 ft

Answer: B

- 274) A lot is in the shape of a right triangle. The shorter leg measures 120 m. The hypotenuse is 40 m longer than the length of the longer leg. How long is the longer leg? 274) _____

A) 160 m B) 200 m C) 240 m D) 120 m

Answer: A

- 275) A boat is 144 feet from the base of cliff. If the distance from the top of the cliff to the boat is 36 more than twice the height of the cliff. Find the height of the cliff. Round to the nearest tenth of a foot if necessary. 275) _____

A) 36 ft B) 108 ft C) 60 ft D) 80.5 ft

Answer: C

- 276) A boat is 108 feet from the base of cliff. If the distance from the top of the cliff to the boat is 27 less than twice the height of the cliff to the water. Find the height of the cliff. Round to the nearest tenth of a foot if necessary. 276) _____

A) 63 ft B) 81 ft C) 45 ft D) 135 ft

Answer: B

- 277) A building needs a ramp to make it handicap accessible. By law, the ramp must run 10 inches horizontally for every 1 inch of rise. If the surface of the ramp is 73 inches long how far above the ground is the inclined end of the ramp? Round to the nearest tenth of an inch. 277) _____

A) 7.3 in. B) 24.3 in. C) 4.8 in. D) 6.6 in.

Answer: A

- 278) A ball is dropped from a cliff that is 256 feet high. The distance S (in feet) that it falls in t seconds is given by the formula $S = 16t^2$. How many seconds (to tenths) will it take for the ball to hit the ground? 278) _____

A) 4 sec B) 4096 sec C) 16 sec D) 15.5 sec

Answer: A

- 279) A rock falls from a tower that is 176 feet high. As it is falling, its height is given by the formula $h = 176 - 16t^2$. How many seconds (in tenths) will it take for the rock to hit the ground ($h = 0$)? 279) _____

A) 12.6 sec B) 13.3 sec C) 3.3 sec D) 1936 sec

Answer: C

- 280) A rock falls from a tower that is 68.6 m high. As it is falling, its height is given by the formula $h = 68.6 - 4.9t^2$, with t in seconds. How many seconds will it take for the rock to hit the ground ($h = 0$)? 280) _____
A) 960.4 sec B) 8 sec C) 3.7 sec D) 8.3 sec

Answer: C

- 281) The position of an object moving in a straight line is given by $s = 2t^2 - 3t$, where s is in meters and t is the time in seconds the object has been in motion. How long (to the nearest tenth) will it take the object to move 5 meters? 281) _____
A) 2.3 sec B) 3.5 sec C) 6.0 sec D) 2.5 sec

Answer: D

- 282) A ball is thrown downward from a window in a tall building. Its position at time t in seconds is $s = 16t^2 + 32t$, where s is in feet. How long (to the nearest tenth) will it take the ball to fall 152 feet? 282) _____
A) 2.2 sec B) 2.0 sec C) 4.8 sec D) 3.1 sec

Answer: A

- 283) Your company uses the quadratic model $y = -11x^2 + 350x$ to represent how many units (y) of a new product will be sold (x) weeks after its release. How many units can you expect to sell in week 20? 283) _____
A) 2600 units B) 7220 units C) 11,400 units D) 6780 units

Answer: A

- 284) Your company uses the quadratic model $y = -4.5x^2 + 150x$ to represent the average number of new customers who will be signed on (x) weeks after the release of your new service. How many new customers can you expect to gain in week 22? 284) _____
A) 1122 customers B) 561 customers C) -528 customers D) 3201 customers

Answer: A

- 285) If an amount of money, called the principal, P , is deposited into an account that earns interest at a rate r , compounded annually, then in two years that investment will grow to an amount A , given by the formula $A = P(1 + r)^2$. If a principal amount of \$5500 grows to \$7147.80 in two years, what is the interest rate? 285) _____
A) 16% B) 14% C) 12% D) 15%

Answer: B

- 286) The stadium vending company finds that sales of hot dogs average 50,000 hot dogs per game when the hot dogs sell for \$2.50 each. For each 50 cent increase in the price, the sales per game drop by 5000 hot dogs. What price per hot dog should the vending company charge to realize the maximum revenue? 286) _____
A) \$4.00 B) \$2.50 C) \$5.00 D) \$3.75

Answer: D

Decide what values of the variable cannot possibly be solutions for the equation.

- 287) $\frac{1}{2x} + \frac{6}{x} = 11$ 287) _____
A) 1, 2 B) 0, $-\frac{1}{2}$ C) -2 D) 0

Answer: D

$$288) \frac{1}{x-4} - \frac{1}{x+8} = 10$$

$$A) -\frac{1}{4}, \frac{1}{8}$$

$$B) -8, 4$$

$$C) -4, 8$$

$$D) -\frac{1}{8}, \frac{1}{4}$$

Answer: B

288) _____

$$289) \frac{5}{x-1} - \frac{6x}{1-x} = 10$$

$$A) -1, 1$$

$$B) -1, 0, 1$$

$$C) 1$$

$$D) -1, 0$$

Answer: C

289) _____

$$290) \frac{x}{x-3} + \frac{11x}{9x+9} = 0$$

$$A) -9, 3$$

$$B) -3, 0, 1$$

$$C) -3, 9$$

$$D) -1, 3$$

Answer: D

290) _____

$$291) \frac{x}{x-5} - \frac{1}{x+9} = \frac{11}{x^2 + 4x - 45}$$

$$A) -5, 0, 9$$

$$B) -9, 5$$

$$C) -9, 0, 5$$

$$D) -5, 9, -45$$

Answer: B

291) _____

Solve the equation.

$$292) \frac{1}{x} + \frac{2}{13x} = -3$$

$$A) \{-5\}$$

$$B) \{-1\}$$

$$C) \emptyset$$

$$D) \left\{-\frac{5}{13}\right\}$$

Answer: D

292) _____

$$293) \frac{2}{17x} + 7 = \frac{3}{23x}$$

$$A) \left\{\frac{3}{7}\right\}$$

$$B) \emptyset$$

$$C) \left\{\frac{5}{7}\right\}$$

$$D) \left\{\frac{5}{2737}\right\}$$

Answer: D

293) _____

$$294) \frac{4x+4}{4} - \frac{4x}{x-4} = x$$

$$A) \left\{-\frac{1}{3}\right\}$$

$$B) \left\{-\frac{4}{15}\right\}$$

$$C) \left\{\frac{4}{5}\right\}$$

$$D) \left\{-\frac{4}{3}\right\}$$

Answer: D

294) _____

$$295) \frac{-5}{x-3} + \frac{3}{x+3} = \frac{-30}{x^2-9}$$

$$A) \emptyset$$

$$B) \{6\}$$

$$C) \{-3\}$$

$$D) \{3\}$$

Answer: A

295) _____

296) $\frac{3}{x-7} + \frac{7}{x+2} = \frac{5}{x^2 - 5x - 14}$ 296) _____

A) $\left\{\frac{51}{7}\right\}$

B) \emptyset

C) $\left\{-\frac{4}{3}\right\}$

D) $\left\{\frac{24}{5}\right\}$

Answer: D

297) $\frac{3}{x+3} + \frac{8}{x+6} = \frac{10}{x^2 + 9x + 18}$ 297) _____

A) \emptyset

B) $\left\{-\frac{52}{11}\right\}$

C) $\{-1\}$

D) $\left\{-\frac{32}{11}\right\}$

Answer: D

298) $\frac{x}{x-5} = \frac{5}{x-5} + 5$ 298) _____

A) $\{-5\}$

B) $\{5\}$

C) $\{0\}$

D) \emptyset

Answer: D

299) $\frac{5}{x^2 - 4} - \frac{3}{x^2 + 5x + 6} = \frac{3}{x^2 + x - 6}$ 299) _____

A) $\{7\}$

B) $\left\{\frac{27}{5}\right\}$

C) $\{-3, -2, 2\}$

D) $\{15\}$

Answer: D

300) $1 - \frac{5}{x} - \frac{24}{x^2} = 0$ 300) _____

A) $\{8, 3\}$

B) $\{-8, 3\}$

C) $\{-8, -3\}$

D) $\{8, -3\}$

Answer: D

301) $\frac{10}{x-2} = 1 + \frac{12}{x+2}$ 301) _____

A) \emptyset

B) $\{6, -8\}$

C) $\{-6, 8\}$

D) $\{-12, 8\}$

Answer: B

302) $\frac{16}{x+2} = 1 + \frac{2}{x-4}$ 302) _____

A) \emptyset

B) $\{-2, 4\}$

C) $\{-12\}$

D) $\{6, 10\}$

Answer: D

303) $1 + \frac{1}{x} = \frac{6}{x^2}$ 303) _____

A) $\{2, 3\}$

B) $\{-3, 2\}$

C) $\{-2, 3\}$

D) $\left\{-\frac{1}{3}, \frac{1}{2}\right\}$

Answer: B

304) $\frac{8}{x-2} + \frac{8}{x+2} = 3$ 304) _____

A) {2, 6} B) $\left\{-\frac{3}{2}, -6\right\}$ C) $\left\{\frac{2}{3}, -6\right\}$ D) $\left\{-\frac{2}{3}, 6\right\}$

Answer: D

305) $\frac{6}{x+5} = 1 - \frac{1}{x-5}$ 305) _____

A) {1, 5} B) {0, 7} C) {0, -5} D) \emptyset

Answer: B

306) $\frac{-5x^2 - 4}{x-4} = \frac{-15x}{x-4} + 4$ 306) _____

A) $\left\{-\frac{4}{5}, 3\right\}$ B) $\left\{\frac{4}{5}, -3\right\}$ C) {3} D) $\left\{\frac{-5 \pm \sqrt{145}}{3}\right\}$

Answer: A

307) $\frac{8x}{x-8} - \frac{4}{x} = \frac{32}{x^2 - 8x}$ 307) _____

A) $\left\{0, \frac{1}{2}\right\}$ B) $\left\{\frac{1}{2}, -\frac{1}{2}\right\}$ C) $\left\{\frac{1}{2}\right\}$ D) {2}

Answer: C

308) $\frac{x}{x-6} - \frac{6}{x+6} = \frac{72}{x^2 - 36}$ 308) _____

A) \emptyset B) $\{\pm 6i\}$ C) $\{\pm 6\}$ D) $\left\{\frac{1}{6}\right\}$

Answer: A

309) $\frac{x+16}{7} = \frac{4x-5}{x}$ 309) _____

A) $\left\{\frac{7}{2}\right\}$ B) {-5, -7} C) {5, 7} D) $\left\{\frac{61}{27}\right\}$

Answer: C

Solve the problem.

310) Martha can rake the leaves in her yard in 2 hours. Her brother can do the job in 7 hours. How long will it take them to do the job working together? 310) _____

A) $\frac{1}{9}$ hr B) $\frac{14}{5}$ hr C) $\frac{1}{14}$ hr D) $\frac{14}{9}$ hr

Answer: D

311) One maid can clean the house in 5 hours. Another maid can do the job in 7 hours. How long will it take them to do the job working together? 311) _____

A) $\frac{1}{12}$ hr B) $\frac{35}{12}$ hr C) $\frac{1}{35}$ hr D) $\frac{35}{2}$ hr

Answer: B

- 312) Frank can type a report in 6 hours. James takes 7 hours to type it. How long will it take the two of them typing together? 312) _____
- A) 42 hr B) $\frac{1}{13}$ hr C) $\frac{1}{42}$ hr D) $\frac{42}{13}$ hr

Answer: D

- 313) An experienced accountant can prepare a tax return in 13 hours. A novice accountant can do the job in 18 hours. How long will it take them to do the job working together? 313) _____
- A) $\frac{1}{31}$ hr B) $\frac{234}{31}$ hr C) $\frac{1}{234}$ hr D) $\frac{234}{5}$ hr

Answer: B

- 314) A water tank can be filled in 9 minutes and emptied in 10 minutes. If the drain is accidentally left open when the tank is being filled, how long does it take to fill the tank? 314) _____
- A) $\frac{90}{19}$ min B) $\frac{1}{19}$ min C) 90 min D) $\frac{1}{90}$ min

Answer: C

Solve the equation.

- 315) $x = \sqrt{4x + 12}$ 315) _____
- A) {6} B) {4} C) \emptyset D) {6, -2}

Answer: A

- 316) $\sqrt{x + 3} = x - 3$ 316) _____
- A) {6} B) {1, 13} C) {1, 6} D) {6, 13}

Answer: A

- 317) $\sqrt{x + 7} + 5 = x$ 317) _____
- A) {9} B) {9, 18} C) {2, 9} D) {2}

Answer: A

- 318) $\sqrt{3x + 10} = 5 - 2x$ 318) _____
- A) $\left\{\frac{3}{4}, 5\right\}$ B) {5} C) $\left\{\frac{5}{4}, 9\right\}$ D) $\left\{\frac{3}{4}\right\}$

Answer: D

- 319) $\sqrt{2x + 15} - x = 6$ 319) _____
- A) {-7} B) {-3} C) {-7, -3} D) \emptyset

Answer: B

- 320) $4x = \sqrt{1 - 6x}$ 320) _____
- A) $\left\{\frac{1}{2}\right\}$ B) $\left\{-\frac{1}{2}\right\}$ C) $\left\{\frac{1}{4}\right\}$ D) $\left\{\frac{1}{8}\right\}$

Answer: D

- 321) $\sqrt{3x + 1} = 3 + \sqrt{x - 4}$ 321) _____
- A) {-1} B) \emptyset C) {-5, -8} D) {5, 8}

Answer: D

- 322) $\sqrt{2x+3} - \sqrt{x+1} = 1$ A) \emptyset B) $\{-3, -1\}$ C) $\{3\}$ D) $\{3, -1\}$ 322) _____
 Answer: D
- 323) $\sqrt{2x+5} - \sqrt{x-2} = 3$ A) $\{-2\}$ B) $\{2\}$ C) $\{3, 8\}$ D) $\{2, 38\}$ 323) _____
 Answer: D
- 324) $\sqrt{3x-2} + \sqrt{11+x} = -1$ A) $\{0\}$ B) $\{5\}$ C) $\left\{-\frac{5}{2}\right\}$ D) \emptyset 324) _____
 Answer: D
- 325) $\sqrt{x+6} + \sqrt{2-x} = 4$ A) $\{\sqrt{31}, -2\}$ B) $\{2, -2\}$ C) $\{-2\}$ D) $\{0\}$ 325) _____
 Answer: C
- 326) $\sqrt{10+x} + \sqrt{11-5x} = -1$ A) \emptyset B) $\left\{\frac{11}{2}\right\}$ C) $\{1\}$ D) $\{0\}$ 326) _____
 Answer: A
- 327) $\sqrt{2x+3} + \sqrt{4-x} = 4$ A) $\{-3\}$ B) $\{3\}$ C) $\left\{3, \frac{11}{9}\right\}$ D) \emptyset 327) _____
 Answer: C
- 328) $\sqrt{6x-5} - \sqrt{4x+8} = 0$ A) $\left\{\frac{3}{2}\right\}$ B) $\left\{\frac{2}{13}\right\}$ C) $\left\{\frac{13}{2}\right\}$ D) $\left\{\frac{13}{10}\right\}$ 328) _____
 Answer: C
- 329) $4\sqrt{x} = \sqrt{9x+9}$ A) $\left\{-\frac{9}{5}\right\}$ B) $\left\{\frac{9}{7}\right\}$ C) $\left\{\frac{9}{25}\right\}$ D) $\left\{-\frac{9}{8}\right\}$ 329) _____
 Answer: B
- 330) $\sqrt[3]{x+8} = 4$ A) $\{8\}$ B) $\{-4\}$ C) $\{56\}$ D) $\{64\}$ 330) _____
 Answer: C
- 331) $\sqrt[3]{5x+4} = -3$ A) $\left\{-\frac{31}{5}\right\}$ B) $\left\{\frac{31}{5}\right\}$ C) $\{-31\}$ D) $\left\{\frac{23}{5}\right\}$ 331) _____
 Answer: A

332) $\sqrt[4]{x^2 - 13} = 1$ A) $\{-\sqrt{14}, \sqrt{14}\}$ B) $\{\sqrt{13}\}$ C) $\{\sqrt{14}\}$ D) $\{-\sqrt{13}, \sqrt{13}\}$ 332) _____
 Answer: A

333) $\sqrt[5]{6x + 5} = 3$ A) $\left\{\frac{81}{2}\right\}$ B) $\{238\}$ C) $\{243\}$ D) $\left\{\frac{119}{3}\right\}$ 333) _____
 Answer: D

334) $\sqrt[3]{2x - 3} + 7 = 5$ A) $\{-11\}$ B) $\left\{-\frac{5}{2}\right\}$ C) $\{-4\}$ D) $\left\{\frac{3}{2}\right\}$ 334) _____
 Answer: B

335) $\sqrt[3]{5x^2 - 3x - 8} = \sqrt[3]{5x^2 + 10x + 9}$ A) $\left\{-\frac{13}{17}\right\}$ B) $\left\{\frac{13}{17}\right\}$ C) $\left\{-\frac{17}{13}\right\}$ D) $\left\{\frac{17}{13}\right\}$ 335) _____
 Answer: C

336) $\sqrt[3]{4 + 6x} - \sqrt[3]{1 - 8x} = 0$ A) $\left\{-\frac{14}{3}\right\}$ B) $\left\{\frac{3}{14}\right\}$ C) $\left\{\frac{14}{3}\right\}$ D) $\left\{-\frac{3}{14}\right\}$ 336) _____
 Answer: D

337) $\sqrt[4]{x - 2} + 10 = 0$ A) \emptyset B) $\{5000\}$ C) $\{-5000\}$ D) $\{5\}$ 337) _____
 Answer: A

338) $\sqrt[4]{x + 4} = \sqrt[4]{9x}$ A) \emptyset B) $\left\{\frac{1}{2}\right\}$ C) $\{2\}$ D) $\left\{\frac{4}{9}\right\}$ 338) _____
 Answer: B

339) $(x^2 + 2)^{1/2} - (2x + 5)^{1/2} = 0$ A) $\{3\}$ B) \emptyset C) $\{-3, 1\}$ D) $\{3, -1\}$ 339) _____
 Answer: D

340) $(x^2 - 3)^{1/2} - (x + 3)^{1/2} = 0$ A) $\{-3, 3\}$ B) $\{2, 3\}$ C) $\{-2, 3\}$ D) $\{-3\}$ 340) _____
 Answer: C

- 341) $(3x + 1)^{1/2} = 3 + (x - 4)^{1/2}$
 A) \emptyset B) {5, 8} C) {-1} D) {-5, -8} 341) _____
 Answer: B
- 342) $(2x + 5)^{1/2} - (x - 2)^{1/2} = 3$
 A) {2} B) {3, 8} C) {2, 38} D) {-2} 342) _____
 Answer: C
- 343) $(10 + x)^{1/2} + (11 - 5x)^{1/2} = -1$
 A) {1} B) {0} C) $\left\{-1, \frac{10}{9}\right\}$ D) \emptyset 343) _____
 Answer: D
- 344) $(2x + 3)^{1/2} + (4 - x)^{1/2} = 4$
 A) \emptyset B) {3} C) $\left\{3, \frac{11}{9}\right\}$ D) {-3} 344) _____
 Answer: C
- 345) $(-2 + 4x)^{1/3} + (-3 + 6x)^{1/3} = 0$
 A) \emptyset B) {2} C) $\left\{\frac{1}{2}\right\}$ D) $\left\{-\frac{1}{2}\right\}$ 345) _____
 Answer: C
- 346) $(x - 5)^{1/4} + 10 = 0$
 A) $\{-2000\}$ B) \emptyset C) {2} D) {2000} 346) _____
 Answer: B
- 347) $x^{2/3} = 5x^{1/3}$
 A) {0, -125} B) {0, 5} C) \emptyset D) {0, 125} 347) _____
 Answer: D
- 348) $x^{1/2} = 3x^{1/4}$
 A) {0, 3} B) {0, 81} C) \emptyset D) {0, 9} 348) _____
 Answer: B
- 349) $x^{1/2} = -5x^{1/4}$
 A) \emptyset B) {0, 25} C) {0} D) {0, -5} 349) _____
 Answer: A
- 350) $(x + 2)^{2/5} = (9x)^{1/5}$
 A) {4, -1} B) $\left\{-\frac{8}{23}\right\}$ C) {4, 1} D) {-4, 1} 350) _____
 Answer: C

351) $6x^{2/5} + 16x^{1/5} + 8 = 0$

A) $\{2, 3\}$

B) $\left\{-2, -\frac{2}{3}\right\}$

C) $\left\{32, \frac{32}{243}\right\}$

D) $\left\{-32, -\frac{32}{243}\right\}$

351) _____

Answer: D

352) $(x - 2)^{2/3} - 9(x - 2)^{1/3} + 20 = 0$

A) \emptyset

B) $\{127, 66\}$

C) $\{7, 6\}$

D) $\{-127, 66\}$

352) _____

Answer: B

353) $36x^4 - 85x^2 + 49 = 0$

A) $\left\{-\frac{7}{6}, -1, 1, \frac{7}{6}\right\}$

B) $\left\{-1, -\frac{6}{7}\right\}$

C) $\left\{-1, -\frac{6}{7}, \frac{6}{7}, 1\right\}$

D) $\left\{1, \frac{7}{6}\right\}$

353) _____

Answer: A

354) $x^4 + 1125 = 134x^2$

A) $\{9, 125\}$

C) $\{-125, -9, 9, 125\}$

B) $\{3, 5\sqrt{5}\}$

D) $\{-5\sqrt{5}, -3, 3, 5\sqrt{5}\}$

354) _____

Answer: D

355) $(2x - 6)^2 - 4(2x - 6) + 3 = 0$

A) $\left\{-\frac{5}{6}, \frac{3}{2}\right\}$

B) $\left\{\frac{7}{2}, \frac{9}{2}\right\}$

C) $\left\{\frac{5}{2}, -\frac{3}{2}\right\}$

D) $\left\{\frac{7}{2}, -\frac{9}{2}\right\}$

355) _____

Answer: B

356) $(5x - 9)^2 = 5(5x - 9) + 14$

A) $\left\{-\frac{7}{5}, -\frac{16}{5}\right\}$

B) $\{-2, 7\}$

C) $\left\{-\frac{11}{5}, -\frac{2}{5}\right\}$

D) $\left\{\frac{7}{5}, \frac{16}{5}\right\}$

356) _____

Answer: D

357) $(x - 3)^4 - 5(x - 3)^2 + 4 = 0$

A) $\{-2, -1, 1, 2\}$

B) $\{1, 2, 4, 5\}$

C) $\{1, 4\}$

D) $\{-1, -4\}$

357) _____

Answer: B

358) $5x^{-2} - 11x^{-1} - 12 = 0$

A) $\left\{\frac{5}{4}, -\frac{1}{3}\right\}$

B) $\left\{-\frac{4}{5}, 3\right\}$

C) $\left\{\frac{4}{5}, -3\right\}$

D) $\left\{-\frac{5}{4}, \frac{1}{3}\right\}$

358) _____

Answer: D

359) $72x^{-2} - 33x^{-1} = 54$

A) $\left\{\frac{8}{9}, -\frac{3}{2}\right\}$

B) $\left\{\frac{9}{8}, \frac{2}{3}\right\}$

C) $\left\{-\frac{9}{8}, -\frac{2}{3}\right\}$

D) $\left\{\frac{9}{8}, -\frac{2}{3}\right\}$

359) _____

Answer: A

360) $3x^{-2/5} + 11x^{-1/5} + 6 = 0$

A) $\left\{ \frac{1}{243}, \frac{243}{32} \right\}$

B) $\left\{ -\frac{1}{243}, -\frac{243}{32} \right\}$

C) $\{3, 2\}$

D) $\left\{ -\frac{1}{3}, -\frac{3}{2} \right\}$

360) _____

Answer: B

Solve for the indicated variable.

361) $\frac{1}{A} = \frac{1}{m} + \frac{1}{t}$, for t

A) $t = 1 - \frac{mA}{m - A}$

B) $t = \frac{mA}{m - A}$

C) $t = 1 + \frac{mA}{m - A}$

D) $t = \frac{m - A}{mA}$

361) _____

Answer: B

362) $\frac{1}{Q} = \frac{1}{T_1} + \frac{1}{T_2}$, for T_2

A) $T_2 = \frac{QT_1}{T_1 - Q}$

B) $T_2 = \frac{Q - T_1}{T_1 Q}$

C) $T_2 = \frac{QT_1}{T_1 + 4Q}$

D) $T_2 = \frac{T_1 - Q}{T_1 Q}$

362) _____

Answer: A

363) $\frac{1}{A} = \frac{1}{B} + \frac{1}{C}$, for A

A) $A = \frac{B}{B + C}$

B) $A = \frac{BC}{B + C}$

C) $A = \frac{B - C}{BC}$

D) $A = 4 + B + C$

363) _____

Answer: B

364) $Z = A(1 + x)^{1/2}$, for x

A) $x = \left(\frac{Z}{A} \right)^2 - 1$

B) $x = \left(\frac{Z}{A} \right)^2$

C) $x = \left(\frac{A}{Z} \right)^2$

D) $x = \left(\frac{Z}{A} \right)^2 + 1$

364) _____

Answer: A

365) $M = \pi r^2 h d$, for r

A) $r = \frac{\pm M \sqrt{\pi h d}}{\pi h d}$

B) $r = \frac{\pm \sqrt{M \pi h d}}{\pi h d}$

C) $r = \pm \sqrt{\pi M h d}$

D) $r = \frac{\pm \sqrt{\pi M h d}}{h d}$

365) _____

Answer: B

366) $A = 2\pi a^2$, for a

A) $a = \frac{\pm \sqrt{2\pi A}}{2\pi}$

B) $a = \sqrt{2\pi A}$

C) $a = \frac{\pm A \sqrt{2\pi}}{2\pi}$

D) $a = \frac{\pm \sqrt{A\pi}}{2}$

366) _____

Answer: A

367) $V = \frac{1}{m} \sqrt{2Vem}$, for m

A) $m = \frac{2V^3}{e}$

B) $m = \frac{2e}{V}$

C) $m = \frac{2V}{e}$

D) $m = \frac{\pm \sqrt{2Ve}}{Ve}$

367) _____

Answer: B

368) $Ve = \frac{1}{2}mv^2$, for v

368) _____

A) $v = \frac{\pm\sqrt{2mVe}}{m}$

B) $v = \pm 2 \frac{\sqrt{Ve}}{m}$

C) $v = \pm\sqrt{2Ve}$

D) $v = \pm\sqrt{\frac{Ve}{2m}}$

Answer: A

Write the inequality in interval notation.

369) $x > -1$

369) _____

A) $(-1, \infty)$

B) $(-1, \infty)$

C) $(-\infty, -1]$

D) $[-1, \infty)$

Answer: B

370) $-3 \leq x < 3$

370) _____

A) $[-3, 3]$

B) $[-3, 3)$

C) $(-3, 3]$

D) $(-3, 3)$

Answer: B

371) $-2 < x$

371) _____

A) $(-\infty, -2]$

B) $(-2, \infty)$

C) $[-2, \infty)$

D) $(-2, \infty]$

Answer: B

372) $7 > x \geq -8$

372) _____

A) $[-8, 7)$

B) $(-8, 7)$

C) $(-8, 7]$

D) $[-8, 7]$

Answer: A

373) $2 < x \leq 7$

373) _____

A) $(2, 7]$

B) $[2, 7)$

C) $[2, 7]$

D) $(2, 7)$

Answer: A

374) $-8 < x < 2$

374) _____

A) $(-8, 2)$

B) $[-8, 2)$

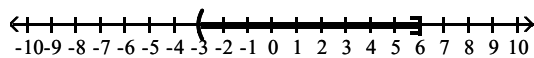
C) $(-8, 2]$

D) $[-8, 2]$

Answer: A

375)

375) _____



A) $(-5, 4]$

B) $[-6, 3)$

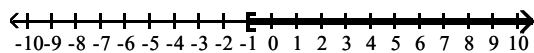
C) $(-3, 6]$

D) $[-3, 6)$

Answer: C

376)

376) _____



A) $(-\infty, -1]$

B) $[2, \infty)$

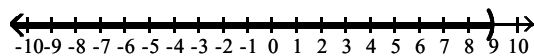
C) $(-\infty, 2]$

D) $[-1, \infty)$

Answer: D

377)

377) _____



A) $(9, \infty)$

B) $(-\infty, \infty]$

C) $(-\infty, -10]$

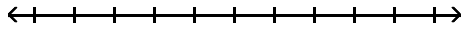
D) $(-\infty, 9)$

Answer: D

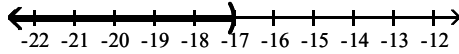
Solve and graph the inequality. Give answer in interval notation.

378) $-2x - 9 > -3x - 8$

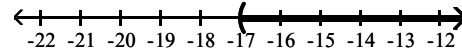
378) _____



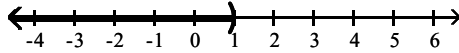
A) $(-\infty, -17)$



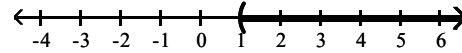
B) $(-17, \infty)$



C) $(-\infty, 1)$



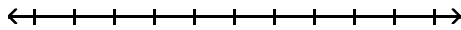
D) $(1, \infty)$



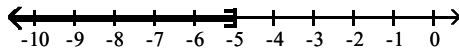
Answer: D

379) $-10x - 12 \leq -11x - 17$

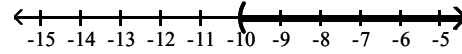
379) _____



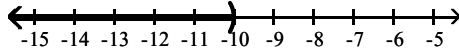
A) $(-\infty, -5]$



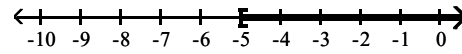
B) $(-10, \infty)$



C) $(-\infty, -10)$



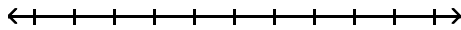
D) $[-5, \infty)$



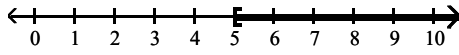
Answer: A

380) $-4x + 3 \geq -5x + 8$

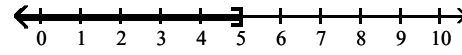
380) _____



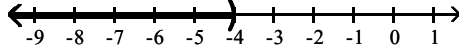
A) $[5, \infty)$



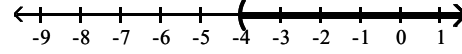
B) $(-\infty, 5]$



C) $(-\infty, -4)$



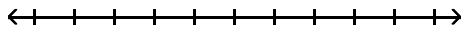
D) $(-4, \infty)$



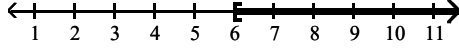
Answer: A

381) $-11x + 5 \geq -10x + 11$

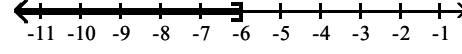
381) _____



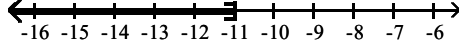
A) $[6, \infty)$



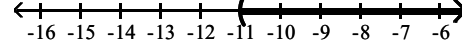
B) $(-\infty, -6]$



C) $(-\infty, -11]$



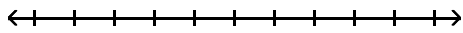
D) $(-11, \infty)$



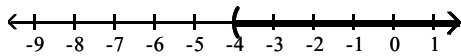
Answer: B

382) $10 - 4x - 1 \geq -5x + 15$

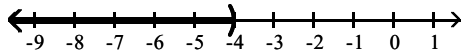
382) _____



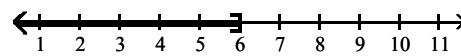
A) $(-4, \infty)$



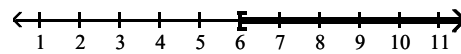
C) $(-\infty, -4)$



B) $(-\infty, 6]$



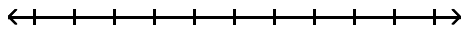
D) $[6, \infty)$



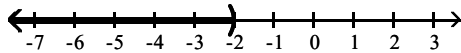
Answer: D

383) $12x - 27 > 3(3x - 11)$

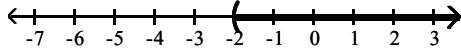
383) _____



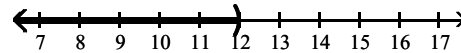
A) $(-\infty, -2)$



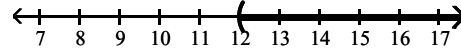
C) $(-2, \infty)$



B) $(-\infty, 12)$



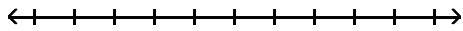
D) $(12, \infty)$



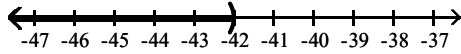
Answer: C

384) $-6(6x + 5) < -42x + 12$

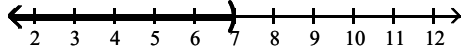
384) _____



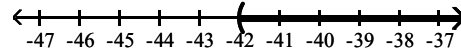
A) $(-\infty, -42)$



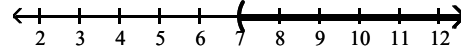
C) $(-\infty, 7)$



B) $(-42, \infty)$



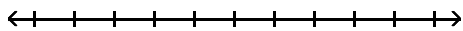
D) $(7, \infty)$



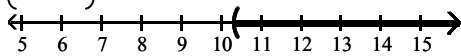
Answer: C

385) $\frac{6x - 8}{9} < \frac{31}{3}$

385) _____

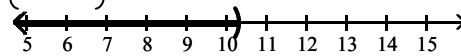


A) $\left(\frac{31}{3}, \infty\right)$



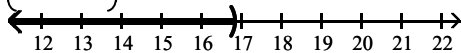
$\frac{31}{3}$

B) $\left(-\infty, \frac{31}{3}\right)$



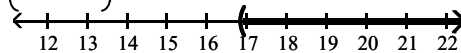
$\frac{31}{3}$

C) $\left(-\infty, \frac{101}{6}\right)$



$\frac{101}{6}$

D) $\left(\frac{101}{6}, \infty\right)$

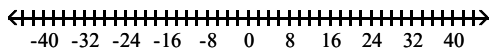


$\frac{101}{6}$

Answer: C

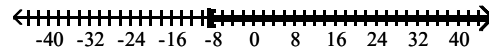
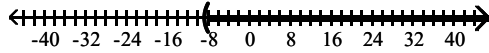
386) $\frac{x}{5} - \frac{3}{5} \leq \frac{x}{2} + 2$

386) _____



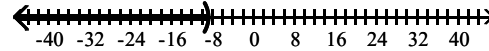
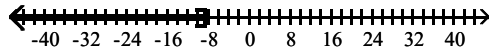
A) $\left[-\frac{26}{3}, \infty\right)$

B) $\left[-\frac{26}{3}, \infty\right)$



C) $\left(-\infty, -\frac{26}{3}\right]$

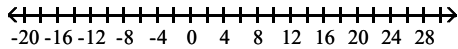
D) $\left(-\infty, -\frac{26}{3}\right]$



Answer: B

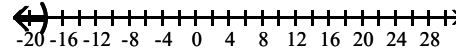
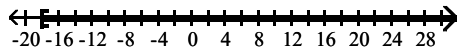
387) $\frac{x-1}{20} \geq \frac{x-5}{24} + \frac{1}{120}$

387) _____



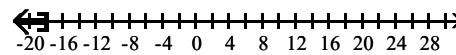
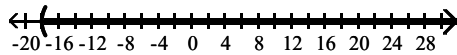
A) $[-18, \infty)$

B) $(-\infty, -18)$



C) $(-18, \infty)$

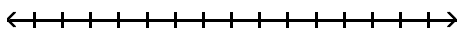
D) $(-\infty, -18]$



Answer: A

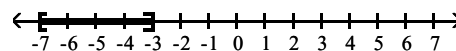
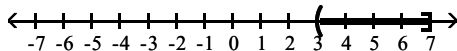
388) $15 < -5x \leq 35$

388) _____



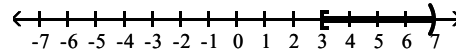
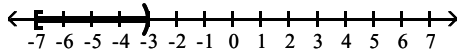
A) $(3, 7]$

B) $[-7, -3]$



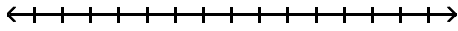
C) $[-7, -3)$

D) $[3, 7)$

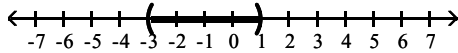


Answer: C

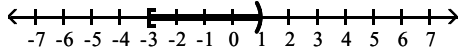
389) $-3 < 2x + 3 \leq 5$



A) $(-3, 1)$

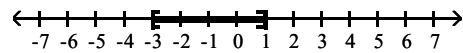


C) $[-3, 1)$

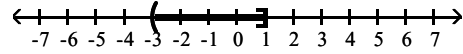


Answer: D

B) $[-3, 1]$

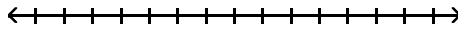


D) $(-3, 1]$

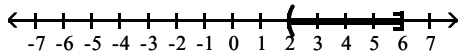


389) _____

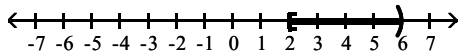
390) $12 < -5x + 2 \leq 32$



A) $(2, 6]$

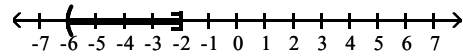


C) $[2, 6)$

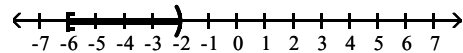


Answer: D

B) $(-6, -2]$

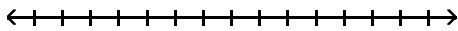


D) $[-6, -2)$

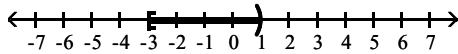


390) _____

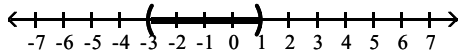
391) $9 > 4x + 5 \geq -7$



A) $[-3, 1)$

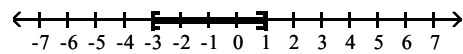


C) $(-3, 1)$

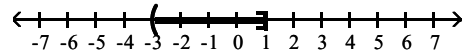


Answer: A

B) $[-3, 1]$

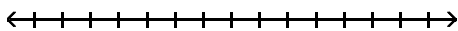


D) $(-3, 1]$

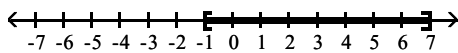


391) _____

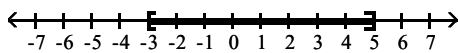
392) $-1 \leq \frac{x+1}{2} \leq 3$



A) $[-1, 7]$

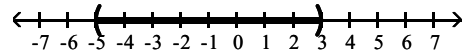


C) $[-3, 5]$

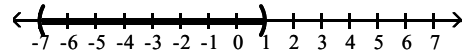


Answer: C

B) $[-5, 3]$



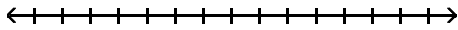
D) $(-7, 1)$



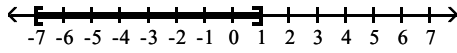
392) _____

393) $-1 \leq \frac{x+1}{-2} \leq 3$

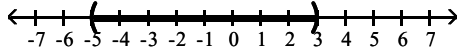
393) _____



A) $[-7, 1]$

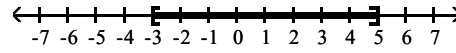


C) $[-5, 3]$

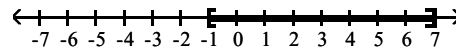


Answer: A

B) $(-3, 5)$



D) $(-1, 7)$



Solve the quadratic inequality. Write the solution set in interval notation.

394) $(x - 6)(x + 5) > 0$

394) _____

A) $(-\infty, -6) \cup (5, \infty)$

B) $(-5, 6)$

C) $(-5, \infty)$

D) $(-\infty, -5) \cup (6, \infty)$

Answer: D

395) $x^2 + 8x + 7 > 0$

395) _____

A) $(-1, \infty)$

B) $(-\infty, -7) \cup (-1, \infty)$

C) $(-\infty, -7)$

D) $(-7, -1)$

Answer: B

396) $x^2 - 4x - 12 < 0$

396) _____

A) $(-\infty, -2)$

B) $(-\infty, -2) \cup (6, \infty)$

C) $(6, \infty)$

D) $(-2, 6)$

Answer: D

397) $x^2 - 2x - 8 \leq 0$

397) _____

A) $[-2, 4]$

B) $(-\infty, -2] \cup [4, \infty)$

C) $(-\infty, -2]$

D) $[4, \infty)$

Answer: A

398) $x^2 + 6x + 5 \geq 0$

398) _____

A) $(-\infty, -5] \cup [-1, \infty)$

B) $(-\infty, -5]$

C) $[-1, \infty)$

D) $[-5, -1]$

Answer: A

399) $x^2 + 7x \leq -12$

399) _____

A) $(-\infty, 3] \cup [4, \infty)$

B) $[3, 4]$

C) $[-4, -3]$

D) $(3, 4)$

Answer: C

400) $(4 + 3x)^2 \geq -9$

400) _____

A) $\left[-\frac{7}{3}, -\frac{1}{3}\right]$

B) \emptyset

C) $(-\infty, \infty)$

D) $\left(-\infty, -\frac{7}{3}\right] \cup \left[-\frac{1}{3}, \infty\right)$

Answer: C

401) $(2 + 3x)^2 \leq -4$

A) $\left[-\frac{4}{3}, 0\right]$

C) \emptyset

Answer: C

B) $(-\infty, \infty)$

D) $\left(-\infty, -\frac{4}{3}\right) \cup (0, \infty)$

401) _____

402) $x^2 - 8x + 5 \geq 0$

A) $(-\infty, -\sqrt{11}] \cup [\sqrt{11}, \infty)$

C) $(-\infty, 4 - \sqrt{11}] \cup [4 + \sqrt{11}, \infty)$

Answer: C

B) $(-\infty, 4 - \sqrt{11}) \cup (4 + \sqrt{11}, \infty)$

D) $[4 - \sqrt{11}, 4 + \sqrt{11}]$

402) _____

403) $-3x^2 + 4x - 5 \leq 0$

A) $(-\infty, \infty)$

B) $\left[\frac{1}{3}, 5\right]$

C) \emptyset

D) $\left[-3, -\frac{1}{5}\right]$

Answer: A

403) _____

Solve the inequality. Write the solution set in interval notation.

404) $(x + 5)(x + 4)(x + 1) > 0$

A) $(-\infty, -5) \cup (-4, -1)$

C) $(-1, \infty)$

Answer: B

B) $(-5, -4) \cup (-1, \infty)$

D) $(-\infty, -4)$

404) _____

405) $(x + 8)(x - 7)(x - 10) < 0$

A) $(-\infty, -8) \cup (7, 10)$

C) $(-\infty, 7)$

Answer: A

B) $(-8, 7) \cup (10, \infty)$

D) $(10, \infty)$

405) _____

406) $(x + 10)(x - 9)(x - 10) > 0$

A) $(-\infty, -10) \cup (9, 10)$

C) $(-\infty, 9)$

Answer: D

B) $(10, \infty)$

D) $(-10, 9) \cup (10, \infty)$

406) _____

407) $(x + 7)(x - 4)(x + 3) > 0$

A) $(-\infty, 4) \cup (3, 7)$

B) $(-7, -4) \cup (3, \infty)$

C) $(-7, -3) \cup (4, \infty)$

D) $(-\infty, -7) \cup (3, 4)$

Answer: C

407) _____

408) $(x - 6)(x - 7)(x + 1) < 0$

A) $(-7, -6) \cup (1, \infty)$

B) $(-6, -1) \cup (7, \infty)$

C) $(-\infty, -1) \cup (6, 7)$

D) $(-\infty, -6) \cup (1, 7)$

Answer: C

408) _____

409) $x^2(x + 81)^2 \geq 0$

A) $(-\infty, -9] \cup [0, 9]$

B) \emptyset

C) $[-9, 0] \cup [9, \infty)$

D) $(-\infty, \infty)$

Answer: D

409) _____

410) $x^2(x + 100)^2 < 0$ 410) _____
 A) $[-10, 0] \cup [10, \infty)$ B) $(-\infty, -10] \cup [0, 10]$
 C) $(-\infty, \infty)$ D) \emptyset

Answer: D

411) $x^3 - 8x^2 > 0$ 411) _____
 A) $(0, 8)$ B) $(-\infty, 0) \cup (8, \infty)$ C) $(-\infty, 8)$ D) $(8, \infty)$

Answer: D

412) $x^3 + 4x^2 - 4x - 16 \geq 0$ 412) _____
 A) $[-4, -2] \cup [2, \infty)$ B) $[-4, 2]$ C) $[-4, \infty)$ D) $[-2, 2] \cup [4, \infty)$

Answer: A

413) $x^3 + 4x^2 - 16x \leq 64$ 413) _____
 A) $[4, \infty)$ B) $(-\infty, -4] \cup [4, \infty)$ C) $(-\infty, 4]$ D) $[-4, 4]$

Answer: C

Solve the rational inequality. Write the solution set in interval notation.

414) $\frac{1}{x + 9} > 0$ 414) _____
 A) $(9, -\infty)$ B) $(-\infty, 9)$ C) $[9, \infty]$ D) $(-9, \infty)$

Answer: D

415) $\frac{-5}{-5x - 6} > 0$ 415) _____
 A) $(0, \infty)$ B) $\left[-\frac{6}{5}, \infty\right)$ C) $\left(-\infty, \frac{6}{5}\right)$ D) $\left(-\infty, -\frac{5}{6}\right)$

Answer: B

416) $\frac{x - 7}{x + 8} \leq 0$ 416) _____
 A) $(-7, 8]$ B) $[-8, 7]$ C) $[-7, 8]$ D) $(-8, 7]$

Answer: D

417) $\frac{2x}{-5x + 9} \geq 13$ 417) _____
 A) $\left[\frac{117}{67}, \frac{9}{5}\right)$ B) $\left[0, \frac{9}{5}\right)$
 C) $\left(-\infty, \frac{117}{67}\right] \cup \left[\frac{117}{67}, \infty\right)$ D) $(-\infty, 0] \cup \left[\frac{9}{5}, \infty\right)$

Answer: A

418) $\frac{x + 8}{x + 7} < 2$ 418) _____
 A) \emptyset B) $(-\infty, -7) \cup (-6, \infty)$
 C) $(-\infty, -6) \cup (7, \infty)$ D) $(-7, -6)$

Answer: B

419) $3 \geq \frac{1}{x}$ 419) _____

A) $\left(0, \frac{1}{3}\right)$ B) $(-\infty, 0) \cup [3, \infty)$ C) $(-\infty, 0) \cup \left[\frac{1}{3}, \infty\right)$ D) $(0, 3]$

Answer: C

420) $\frac{4x+5}{x-2} \leq 0$ 420) _____

A) $\left(-\infty, -\frac{5}{4}\right] \cup (2, \infty)$ B) $\left[-\frac{5}{4}, 2\right]$

C) $\left[-\frac{5}{4}, 2\right)$ D) $\left(-\infty, -\frac{5}{4}\right] \cup [2, \infty)$

Answer: C

421) $\frac{(x-3)(x+7)}{x-4} \leq 0$ 421) _____

A) $(-\infty, -7) \cup (3, 4)$ B) $[-7, 3] \cup (4, \infty)$ C) $(-\infty, -7] \cup [3, 4)$ D) $[3, 4)$

Answer: C

422) $\frac{-5x+6}{3x^2+2} > 0$ 422) _____

A) $\left(-\infty, \frac{6}{5}\right)$ B) $\left(-\frac{6}{5}, \infty\right)$ C) $(-\infty, 0)$ D) $\left(-\infty, -\frac{5}{6}\right)$

Answer: A

423) $\frac{8}{(x+5)^2} < 0$ 423) _____

A) $(-\infty, -5)$ B) $(-\infty, \infty)$ C) \emptyset D) $(-5, 0)$

Answer: C

Solve the problem.

424) The profit made when t units are sold, $t > 0$, is given by $P = t^2 - 30t + 209$. Determine the number of units to be sold in order for $P = 0$ (the break-even point). 424) _____

A) $t > 11$ B) $t = -11$ or $t = -19$

C) $t = 30$ D) $t = 11$ or $t = 19$

Answer: D

425) The profit made when t units are sold, $t > 0$, is given by $P = t^2 - 27t + 170$. Determine the number of units to be sold in order for $P > 0$ (a profit is made). 425) _____

A) $t = 17$ or $t = 10$ B) $t > 17$ or $t < 10$ C) $t = 27$ D) $17 < t < 10$

Answer: B

426) The profit made when t units are sold, $t > 0$, is given by $P = t^2 - 25t + 156$. Determine the number of units to be sold in order for $P < 0$ (a loss is taken). 426) _____

A) $12 < t < 13$ B) $t > 0$ C) $t < 12$ or $t > 13$ D) $t = 12$ or $t = 13$

Answer: A

- 427) The cost of producing t units is $C = 4t^2 + 6t$, and the revenue generated from sales is $R = 5t^2 + t$. Determine the number of units to be sold in order to generate a profit. 427) _____
A) $t > 6$ B) $t > 5$ C) $t > 0$ D) $t > 7$

Answer: B

- 428) A rectangular enclosure must have an area of at least 4200 yd^2 . If 260 yd of fencing is to be used, and the width cannot exceed the length, within what limits must the width of the enclosure lie? 428) _____
A) $60 \leq w \leq 65$ B) $0 \leq w \leq 60$ C) $65 \leq w \leq 70$ D) $60 \leq w \leq 70$

Answer: A

- 429) A coin is tossed upward from a balcony 176 ft high with an initial velocity of 16 ft/sec . During what interval of time will the coin be at a height of at least 80 ft ? ($h = -16t^2 + v_0t + h_0$.) 429) _____
A) $3 \leq t \leq 6$ B) $2 \leq t \leq 3$ C) $0 \leq t \leq 3$ D) $0 \leq t \leq 1$

Answer: C

- 430) A retailer knows that n games can be sold in a month if the price is $30 - 0.2n$ dollars per game. If he buys each game for $\$14$, and if he wishes to make a profit of at least $\$300$ per month on sales of this game, how many games must he sell each month? 430) _____
A) $30 \leq n \leq 80$ B) $30 \leq n \leq 50$ C) $25 \leq n \leq 40$ D) $25 \leq n \leq 30$

Answer: B

- 431) If a rocket is propelled upward from ground level, its height in meters after t seconds is given by $h = -9.8t^2 + 117.6t$. During what interval of time will the rocket be higher than 343 m ? 431) _____
A) $10 < t < 12$ B) $0 < t < 5$ C) $5 < t < 7$ D) $7 < t < 10$

Answer: C

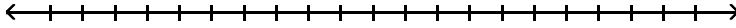
- 432) A flare fired from the bottom of a gorge is visible only when the flare is above the rim. If it is fired with an initial velocity of 160 ft/sec , and the gorge is 384 ft deep, during what interval can the flare be seen? ($h = -16t^2 + v_0t + h_0$.) 432) _____
A) $4 < t < 6$ B) $12 < t < 14$ C) $8 < t < 10$ D) $0 < t < 4$

Answer: A

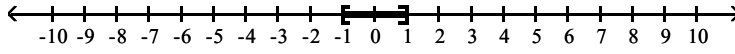
Graph the solution set.

433) $|x| = 1$

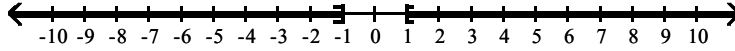
433) _____



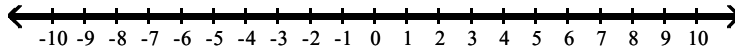
A)



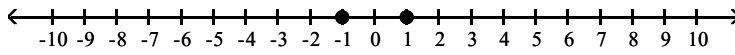
B)



C)



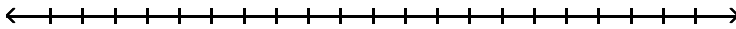
D)



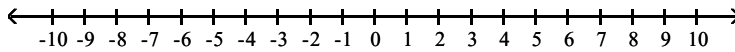
Answer: D

434) $|x| = -6$

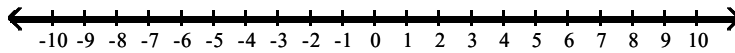
434) _____



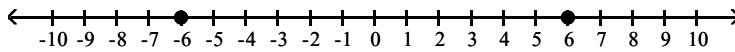
A)



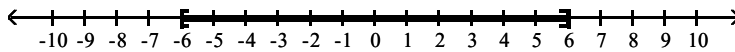
B)



C)



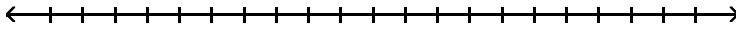
D)



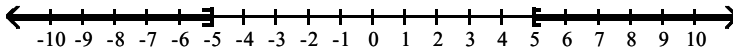
Answer: A

435) $|x| > 5$

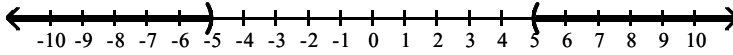
435) _____



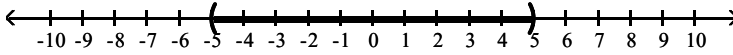
A)



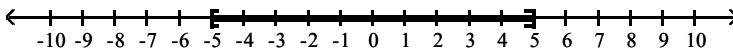
B)



C)



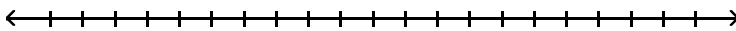
D)



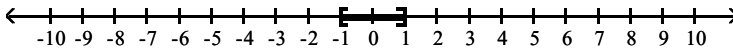
Answer: B

436) $|x| \geq 1$

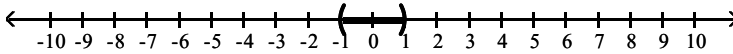
436) _____



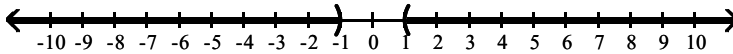
A)



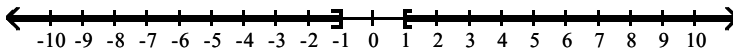
B)



C)



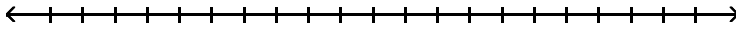
D)



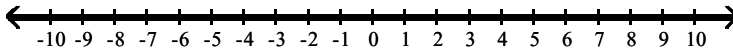
Answer: D

437) $|x| > -1$

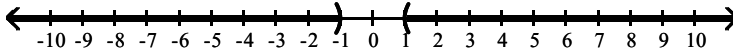
437) _____



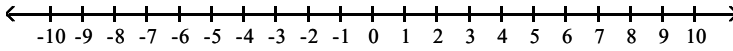
A)



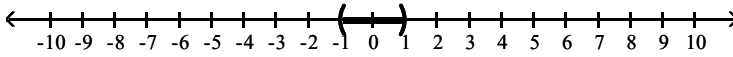
B)



C)



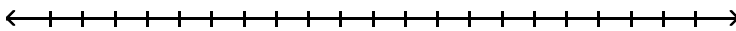
D)



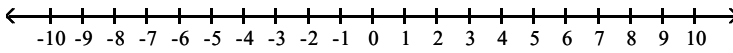
Answer: A

438) $|x| \neq 3$

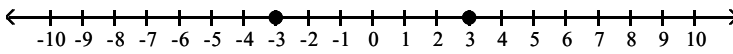
438) _____



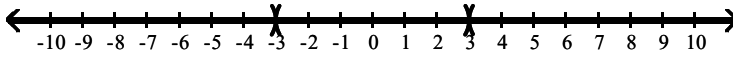
A)



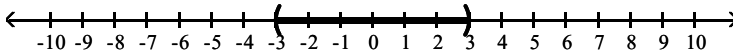
B)



C)



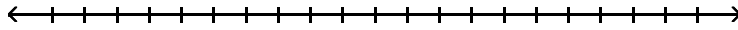
D)



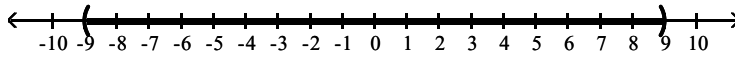
Answer: C

439) $|x| < 9$

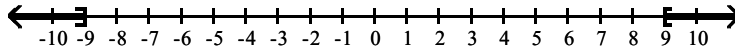
439) _____



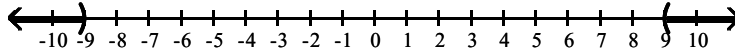
A)



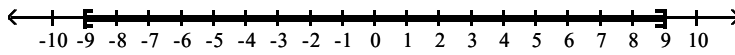
B)



C)



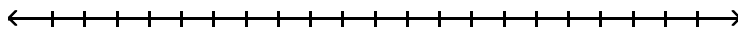
D)



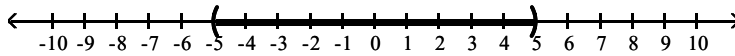
Answer: A

440) $|x| \leq 5$

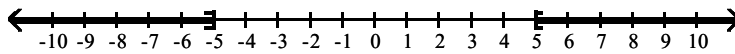
440) _____



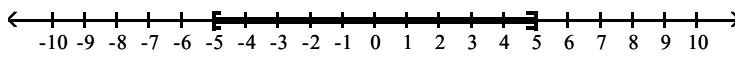
A)



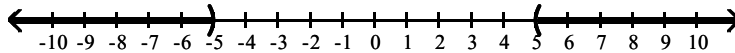
B)



C)



D)



Answer: C

Solve the equation.

441) $|9x + 2| = 3$

441) _____

A) $\left\{-\frac{5}{9}, -\frac{1}{9}\right\}$

B) $\left\{\frac{1}{9}, -\frac{5}{9}\right\}$

C) $\left\{\frac{1}{9}\right\}$

D) $\left\{\frac{5}{9}, -\frac{1}{9}\right\}$

Answer: B

442) $|2x - 4| = 5$

442) _____

A) $\left\{\frac{9}{2}\right\}$

B) $\left\{\frac{9}{2}, -\frac{1}{2}\right\}$

C) $\left\{\frac{1}{2}, -\frac{9}{2}\right\}$

D) $\left\{-\frac{1}{2}, -\frac{9}{2}\right\}$

Answer: B

443) $|-9x + 8| = 1$

A) $\left\{\frac{7}{9}, 1\right\}$

Answer: A

B) $\left\{\frac{7}{9}\right\}$

C) $\left\{1, -\frac{7}{9}\right\}$

D) $\left\{-1, -\frac{7}{9}\right\}$

443) _____

444) $|-8x + 7| = 4$

A) $\left\{\frac{3}{8}, \frac{11}{8}\right\}$

Answer: A

B) $\left\{-\frac{11}{8}, -\frac{3}{8}\right\}$

C) $\left\{\frac{3}{8}\right\}$

D) $\left\{-\frac{3}{8}, \frac{3}{8}\right\}$

444) _____

445) $|5 - 8x| = 16$

A) $\left\{-\frac{11}{8}\right\}$

Answer: C

B) $\left\{\frac{11}{8}, -\frac{11}{8}\right\}$

C) $\left\{-\frac{11}{8}, \frac{21}{8}\right\}$

D) $\left\{-\frac{21}{8}, \frac{11}{8}\right\}$

445) _____

446) $\left|\frac{2}{x+2}\right| = 5$

A) $\left\{\frac{12}{5}, \frac{8}{5}\right\}$

Answer: D

B) $\left\{\frac{8}{5}, \frac{12}{5}\right\}$

C) $\{-2\}$

D) $\left\{-\frac{8}{5}, -\frac{12}{5}\right\}$

446) _____

447) $\left|\frac{9x-3}{10}\right| = 5$

A) $\left\{\frac{53}{9}\right\}$

Answer: D

B) $\left\{\frac{47}{5}, -\frac{53}{5}\right\}$

C) $\left\{\frac{8}{5}, -\frac{2}{5}\right\}$

D) $\left\{\frac{53}{9}, -\frac{47}{9}\right\}$

447) _____

448) $\left|\frac{3x+2}{8x-5}\right| = 8$

A) $\left\{2, -\frac{10}{3}\right\}$

Answer: B

B) $\left\{\frac{42}{61}, \frac{38}{67}\right\}$

C) $\left\{\frac{38}{61}, \frac{42}{67}\right\}$

D) $\left\{-\frac{42}{67}, \frac{10}{61}\right\}$

448) _____

449) $|9x + 8| = |8x + 5|$

A) $\{13, 1\}$

Answer: D

B) $\{-13, 1\}$

C) $\left\{-\frac{3}{17}, -13\right\}$

D) $\left\{-3, -\frac{13}{17}\right\}$

449) _____

450) $|3x - 2| = |8x - 11|$

A) $\left\{\frac{13}{5}, 1\right\}$

Answer: D

B) $\left\{-\frac{13}{5}, 1\right\}$

C) $\left\{-\frac{9}{11}, -\frac{13}{5}\right\}$

D) $\left\{\frac{9}{5}, \frac{13}{11}\right\}$

450) _____

451) $|9x + 4| = |1 - 2x|$

A) $\left\{\frac{5}{11}, 1\right\}$

Answer: B

B) $\left\{-\frac{3}{11}, -\frac{5}{7}\right\}$

C) $\left\{-\frac{3}{7}, -\frac{5}{11}\right\}$

D) $\left\{-\frac{5}{11}, 1\right\}$

451) _____

452) $|-8 + 3x| = |7 - 4x|$

A) $\left\{\frac{15}{7}, -1\right\}$

Answer: A

B) $\left\{\frac{1}{7}, 1\right\}$

C) $\left\{-\frac{1}{7}, 1\right\}$

D) $\left\{-15, \frac{1}{7}\right\}$

452) _____

453) $|2x - 5| = |x - 1|$

A) $\{-4, -2\}$

Answer: D

B) \emptyset

C) $\{4\}$

D) $\{4, 2\}$

453) _____

454) $|5x + 1| = |x - 9|$

A) $\left\{-\frac{5}{2}, \frac{4}{3}\right\}$

Answer: A

B) $\left\{-\frac{5}{2}\right\}$

C) \emptyset

D) $\left\{\frac{5}{2}, -\frac{4}{3}\right\}$

454) _____

455) $|8x + 7| = |x + 4|$

A) $\left\{\frac{3}{7}, \frac{11}{7}\right\}$

Answer: C

B) \emptyset

C) $\left\{-\frac{3}{7}, -\frac{11}{9}\right\}$

D) $\left\{-\frac{3}{7}, \frac{10}{7}\right\}$

455) _____

456) $|x + 8| + 4 = 6$

A) \emptyset

Answer: B

B) $\{-6, -10\}$

C) $\{-6\}$

D) $\{6, 10\}$

456) _____

457) $|3x + 2| + 9 = 15$

A) $\left\{\frac{4}{3}, -\frac{8}{3}\right\}$

Answer: A

B) \emptyset

C) $\{2, -4\}$

D) $\left\{-\frac{4}{3}, \frac{8}{3}\right\}$

457) _____

458) $|2x + 8| - 9 = -5$

A) $\left\{-\frac{1}{2}, -\frac{3}{2}\right\}$

Answer: B

B) $\{-2, -6\}$

C) \emptyset

D) $\{2, 6\}$

458) _____

459) $|x + 2| = 0$

A) $\{-2\}$

Answer: A

B) $(2, \infty)$

C) $(-\infty, -2)$

D) $\{2, -2\}$

459) _____

460) $|2x - 8| = -4$

A) $\{2\}$

Answer: C

B) $\{-2, 2\}$

C) \emptyset

D) $\{6, -2\}$

460) _____

461) $|7x + 6| + 7 = -1$

A) $\{-2\}$

Answer: B

B) \emptyset

C) $\left\{-\frac{2}{7}, -2\right\}$

D) $\left\{\frac{2}{7}, 2\right\}$

461) _____

462) $|x^2 + 2x - 15| = 0$ 462) _____
 A) $\{-5, -3\}$ B) $\{3, 5\}$ C) $\{-3, 5\}$ D) $\{-5, 3\}$
 Answer: D

463) $|3x^3 - 3x^2 - 6x| = 0$ 463) _____
 A) $\left\{\frac{1}{2}, 1, 0\right\}$ B) $\left\{\frac{1}{2}, -1\right\}$ C) $\{2, -1, 0\}$ D) $\left\{\frac{1}{2}, 0\right\}$
 Answer: C

464) $|x^2 + 9| = |6x|$ 464) _____
 A) $\{-3\}$ B) $\{-3, 3\}$ C) \emptyset D) $\{3\}$
 Answer: B

Solve the inequality. Write the solution set in interval notation.

465) $|-3 - 4x| > 2$ 465) _____
 A) $\left(-\infty, \frac{3}{4}\right) \cup \left(-\frac{1}{4}, \infty\right)$ B) $\left(\frac{5}{4}, \frac{1}{4}\right)$
 C) $\left(\frac{1}{4}, -\frac{5}{4}\right)$ D) $\left(-\infty, -\frac{5}{4}\right) \cup \left(-\frac{1}{4}, \infty\right)$
 Answer: D

466) $|-9 + 9x| > 6$ 466) _____
 A) $\left(-\infty, -\frac{13}{9}\right) \cup \left(-\frac{1}{9}, \infty\right)$ B) $\left(-\infty, \frac{1}{3}\right) \cup \left(\frac{5}{3}, \infty\right)$
 C) $\left(\frac{1}{3}, \frac{5}{3}\right)$ D) $\left(\frac{5}{3}, -\frac{1}{3}\right)$
 Answer: B

467) $|x + 2| > 9$ 467) _____
 A) $(7, \infty)$ B) $(-\infty, -11) \cup (7, \infty)$
 C) \emptyset D) $(-11, 7)$
 Answer: B

468) $|2 - 3x| \geq 11$ 468) _____
 A) $(-\infty, -3] \cup \left[\frac{13}{3}, \infty\right)$ B) $\left[-\frac{13}{3}, 3\right]$
 C) $(-\infty, 3] \cup \left[\frac{13}{3}, \infty\right)$ D) $\left[-3, \frac{13}{3}\right]$
 Answer: A

469) $|4 - x| \geq 1$ 469) _____
 A) $[3, 5]$ B) $[5, \infty)$ C) $[3, \infty)$ D) $(-\infty, 3] \cup [5, \infty)$
 Answer: D

470) $\left| \frac{5}{8} - \frac{1}{3}x \right| > \frac{2}{5}$

A) $(-\infty, \infty)$

C) $\left(-\infty, \frac{27}{40}\right) \cup \left(\frac{123}{40}, \infty\right)$

Answer: C

B) $\left(-\infty, -\frac{123}{40}\right) \cup \left(\frac{27}{40}, \infty\right)$

D) $\left(\frac{27}{40}, \frac{123}{40}\right)$

470) _____

471) $|x + 3| < 2$

A) \emptyset

C) $(-5, 1)$

Answer: D

B) $(-\infty, -5) \cup (-1, \infty)$

D) $(-5, -1)$

471) _____

472) $|5x + 7| < 14$

A) $\left(-\infty, -\frac{21}{5}\right) \cup \left(\frac{7}{5}, \infty\right)$

C) $(-\infty, 5)$

Answer: D

B) $\left(-\infty, -\frac{21}{5}\right)$

D) $\left(-\frac{21}{5}, \frac{7}{5}\right)$

472) _____

473) $|-9x + 1| < 8$

A) $\left(-\frac{7}{9}, -1\right)$

C) $\left(-\infty, -\frac{7}{9}\right) \cup (1, \infty)$

Answer: D

B) $\left(-\infty, -\frac{11}{9}\right) \cup \left(\frac{5}{9}, \infty\right)$

D) $\left(-\frac{7}{9}, 1\right)$

473) _____

474) $|2 - 3x| \leq 11$

A) $\left[-\frac{13}{3}, 3\right]$

C) $(-\infty, 3] \cup \left[\frac{13}{3}, \infty\right)$

Answer: D

B) $(-\infty, -3] \cup \left[\frac{13}{3}, \infty\right)$

D) $\left[-3, \frac{13}{3}\right]$

474) _____

475) $|9 - x| \leq 4$

A) $(-\infty, 5] \cup [13, \infty)$

B) $[5, \infty)$

C) $[5, 13]$

D) $[13, \infty)$

Answer: C

475) _____

476) $\left| \frac{5}{2} - \frac{1}{3}x \right| < \frac{2}{5}$

A) $(-\infty, \infty)$

C) $\left(-\infty, \frac{63}{10}\right) \cup \left(\frac{87}{10}, \infty\right)$

Answer: D

B) $\left(-\infty, -\frac{87}{10}\right) \cup \left(\frac{63}{10}, \infty\right)$

D) $\left(\frac{63}{10}, \frac{87}{10}\right)$

476) _____

477) $|8x + 2| + 6 < 14$

- A) $\left(-\infty, -\frac{5}{4}\right)$
 C) $\left(-\infty, -\frac{5}{4}\right) \cup \left(\frac{3}{4}, \infty\right)$

Answer: B

B) $\left(-\frac{5}{4}, \frac{3}{4}\right)$

D) \emptyset

477) _____

478) $|4x + 7| + 8 < 16$

A) $\left(-\infty, -\frac{15}{4}\right)$

C) \emptyset

Answer: B

B) $\left(-\frac{15}{4}, \frac{1}{4}\right)$

D) $\left(-\infty, -\frac{15}{4}\right) \cup \left(\frac{1}{4}, \infty\right)$

478) _____

479) $|4x - 7| - 5 \geq 1$

A) $\left[\frac{1}{4}, \frac{13}{4}\right]$

Answer: D

B) $\left[\frac{13}{4}, \infty\right)$

C) \emptyset

D) $\left(\infty, \frac{1}{4}\right] \cup \left[\frac{13}{4}, \infty\right)$

479) _____

480) $|x + 5| - 2 > 12$

A) $(-\infty, -5) \cup (19, \infty)$

C) $(-19, 9)$

Answer: B

B) $(-\infty, -19) \cup (9, \infty)$

D) $(-\infty, -19) \cup (5, \infty)$

480) _____

481) $5 + \left|1 - \frac{1}{2}x\right| \geq 8$

A) $[-4, 8]$

Answer: D

B) $(-\infty, -8] \cup [4, \infty)$

C) $[-8, 4]$

D) $(-\infty, -4] \cup [8, \infty)$

481) _____

482) $|x - 5| \geq 0$

A) $(-\infty, \infty)$

Answer: A

B) $(-\infty, 5) \cup (5, \infty)$

C) \emptyset

D) $[5, -5]$

482) _____

483) $|7x + 1| > -8$

A) $(-\infty, \infty)$

C) $(-\infty, 1) \cup \left(-\frac{9}{7}, \infty\right)$

Answer: A

B) $\left(-\infty, \frac{11}{7}\right) \cup \left(-\frac{5}{7}, \infty\right)$

D) \emptyset

483) _____

484) $|-2x + 3| > -2$

A) $\left(-\infty, \frac{5}{2}\right)$

Answer: C

B) $\left(\frac{1}{2}, \frac{5}{2}\right)$

C) $(-\infty, \infty)$

D) \emptyset

484) _____

485) $|-5x + 6| \geq -5$ 485) _____
 A) $\left(\frac{1}{5}, \frac{11}{5}\right)$ B) $(-\infty, \infty)$ C) \emptyset D) $\left(-\infty, \frac{11}{5}\right)$

Answer: B

486) $|x + 9| \leq 0$ 486) _____
 A) \emptyset B) $\{9\}$ C) $(-\infty, -9)$ D) $\{-9\}$

Answer: D

487) $|x + 9| < 0$ 487) _____
 A) \emptyset B) $\{9\}$ C) $\{-9\}$ D) $(-\infty, -9)$

Answer: A

488) $|5x - 9| \leq -8$ 488) _____
 A) $\left(-\infty, \frac{1}{5}\right) \cup (-3, \infty)$ B) $\left(-\infty, \frac{17}{5}\right) \cup \left(\frac{1}{5}, \infty\right)$
 C) $\left(\frac{17}{5}, \frac{1}{5}\right)$ D) \emptyset

Answer: D

489) $|x^4 + 12x^2 + 36| < 0$ 489) _____
 A) \emptyset B) $(-\infty, \infty)$ C) $(-\infty, -6) \cup (6, \infty)$ D) $(-6, 6)$

Answer: A

490) $|x^4 + 4x^2 + 4| > 0$ 490) _____
 A) $(-2, 2)$ B) \emptyset C) $(-\infty, \infty)$ D) $(-\infty, -2) \cup (2, \infty)$

Answer: C

491) $\left|\frac{4x + 1}{x - 5}\right| \geq 0$ 491) _____
 A) $\left[-\frac{1}{4}, 5\right)$ B) $\left(-\infty, -\frac{1}{4}\right) \cup (5, \infty)$
 C) $(-5, 5)$ D) $(-\infty, 5) \cup (5, \infty)$

Answer: D

Write the statement as an absolute value inequality.

492) x is within 3 units of 2 492) _____
 A) $|x - 2| \leq 3$ B) $|x - 3| < 2$ C) $|x - 2| < 3$ D) $|3 - x| < 2$

Answer: A

493) z is no less than 6 units from 20 493) _____
 A) $|z - 20| \leq 6$ B) $|z - 6| > 20$ C) $|z - 20| \geq 6$ D) $|z - 20| > 6$

Answer: C

494) m is no more than 9 units from 6 494) _____
 A) $|m - 6| > 9$ B) $|m - 9| < 6$ C) $|m - 6| \leq 9$ D) $|m - 6| < 9$

Answer: C

- 495) p is 5 units from 8
 A) $|p - 5| = 8$ B) $|p - 8| = 5$ C) $|p - 8| < 5$ D) $|p| = 3$ 495) _____
 Answer: B

Solve the problem.

- 496) The temperatures in a freeze-dry process in degrees Celsius roughly satisfy the inequality $|C + 80| \leq 57$. What range of temperatures corresponds to this inequality? 496) _____
 A) $[-23^\circ\text{C}, 23^\circ\text{C}]$ B) $[-137^\circ\text{C}, -23^\circ\text{C}]$
 C) $[-137^\circ\text{C}, 137^\circ\text{C}]$ D) $[-23^\circ\text{C}, 137^\circ\text{C}]$
 Answer: B

- 497) In a milling operation, the thickness of the aluminium foil that can be produced satisfies the inequality $|x - 1.94| \leq 1.02$. What range of thicknesses corresponds to this inequality? 497) _____
 A) $[0.46, 2.96]$ B) $[0.92, 2.96]$ C) $[1.02, 1.94]$ D) $[0.92, 5.92]$
 Answer: B

- 498) The average annual growth rate of a coral reef in inches satisfies the inequality $|x - 4.92| \leq 2.24$. What range of growth corresponds to this inequality? 498) _____
 A) $[2.68, 14.32]$ B) $[2.24, 4.92]$ C) $[2.68, 7.16]$ D) $[1.34, 7.16]$
 Answer: C

- 499) The number of non-text books read by college students ranges from 7 to 61. Using B as the variable, write an absolute value inequality that corresponds to this range. 499) _____
 A) $|B - 54| \leq 7$ B) $|B - 27| \leq 34$ C) $|B - 7| \leq 54$ D) $|B - 34| \leq 27$
 Answer: D

- 500) The high temperature on December 12 in Tampa, FL ranges from 36°F to 84°F . Using F as the variable, write an absolute value inequality that corresponds to this range. 500) _____
 A) $|F - 36| \leq 48$ B) $|F - 24| \leq 60$ C) $|F - 48| \leq 36$ D) $|F - 60| \leq 24$
 Answer: D

- 501) A real estate development consists of home sites that range in width from 53 to 119 feet and in depth from 140 to 194 feet. Using x as the variable in both cases, write absolute value inequalities that correspond to these ranges. 501) _____
 A) $|x - 86| \leq 33, |x - 167| \leq 27$ B) $|x - 33| \leq 86, |x - 27| \leq 167$
 C) $|B - 66| \leq 53, |x - 54| \leq 140$ D) $|B - 53| \leq 66, |x - 140| \leq 54$
 Answer: A