

**Essentials of Geology, 13e (Lutgens/Tarbuck/Tasa)**  
**Chapter 3 Matter and Minerals**

1) Which of the following best defines a mineral and a rock?

- A) A rock has an orderly, repetitive, geometrical, internal arrangement of minerals; a mineral is a lithified or consolidated aggregate of rocks.
- B) A mineral consists of its constituent atoms arranged in a geometrically repetitive structure; in a rock, the atoms are randomly bonded without any geometric pattern.
- C) In a mineral, the constituent atoms are bonded in a regular, repetitive, internal structure; a rock is a lithified or consolidated aggregate of different mineral grains.
- D) A rock consists of atoms bonded in a regular, geometrically predictable arrangement; a mineral is a consolidated aggregate of different rock particles.

Answer: C

Diff: 1

Chapter Subhead: 3.1 Minerals: Building Blocks of Rocks

Bloom's: Remembering/Understanding

2) Which one of the following is NOT true for minerals?

- A) They have a specific, internal, crystalline structure.
- B) They can be a liquid, solid, or gas.
- C) They have a specific, predictable chemical composition.
- D) They can be identified by characteristic physical properties.

Answer: B

Diff: 1

Chapter Subhead: 3.1 Minerals: Building Blocks of Rocks

Bloom's: Remembering/Understanding

3) \_\_\_\_\_ is NOT a mineral.

- A) Halite
- B) Calcite
- C) Oxygen
- D) Gold

Answer: C

Diff: 1

Chapter Subhead: 3.1 Minerals: Building Blocks of Rocks

Bloom's: Remembering/Understanding

4) A compound is a stable chemical substance composed of two or more \_\_\_\_\_.

- A) elements
- B) molecules
- C) minerals
- D) electrons

Answer: A

Diff: 1

Chapter Subhead: 3.2 Atoms: Building Blocks of Minerals

Bloom's: Remembering/Understanding

5) What is the smallest particle of matter that exhibits and defines the distinctive chemical characteristics of the individual elements?

- A) electron
- B) element
- C) compound
- D) atom

Answer: D

Diff: 1

Chapter Subhead: 3.2 Atoms: Building Blocks of Minerals

Bloom's: Remembering/Understanding

6) A(n) \_\_\_\_\_ is not a fundamental particle found in atoms.

- A) neutron
- B) photon
- C) electron
- D) proton

Answer: B

Diff: 1

Chapter Subhead: 3.2 Atoms: Building Blocks of Minerals

Bloom's: Remembering/Understanding

7) Each atom of the same element, zinc for example, has the same number of \_\_\_\_\_.

- A) electrons in the nucleus
- B) protons in the nucleus
- C) neutrons in the outer nuclear shell
- D) electrons in the valence bond level

Answer: B

Diff: 1

Chapter Subhead: 3.2 Atoms: Building Blocks of Minerals

Bloom's: Remembering/Understanding

8) How many neutrons are in its nucleus?

- A) 21
- B) 7
- C) 14
- D) 6

Answer: B

Diff: 2

Chapter Subhead: 3.2 Atoms: Building Blocks of Minerals

Bloom's: Applying/Analyzing

9) \_\_\_\_\_ denote positively charged, nuclear particles.

- A) Protons
- B) Electrons
- C) Isotrons
- D) Neutrons

Answer: A

Diff: 1

Chapter Subhead: 3.2 Atoms: Building Blocks of Minerals

Bloom's: Remembering/Understanding

10) What are the lightest or least massive of the fundamental atomic particles?

- A) uranium nuclei
- B) protons
- C) electrons
- D) neutrons

Answer: C

Diff: 1

Chapter Subhead: 3.2 Atoms: Building Blocks of Minerals

Bloom's: Remembering/Understanding

11) A \_\_\_\_\_ denotes the purity of gold used in jewelry.

- A) carnot
- B) carette
- C) karat
- D) carlot

Answer: C

Diff: 1

Chapter Subhead: 3.2 Atoms: Building Blocks of Minerals - "Did You Know?" Box

Bloom's: Remembering/Understanding

12) Which of the following is an accurate description of ionic bonding?

- A) Nuclei of bonding atoms exchange electrons; the resulting ions are bonded together by the attractive forces between the negative and positive nucleons.
- B) Atoms of two different elements share electrons and protons; the resulting compound is bonded together by the strong, binding energy of shared protons.
- C) Nuclei of two different atoms share electrons, and the resulting compound is tightly bonded by the very strong, induced, electronuclear bonds.
- D) Atoms of different elements, having gained or lost electrons, form negative and positive ions that are bonded together by attractive forces between ions with opposite charges.

Answer: D

Diff: 1

Chapter Subhead: 3.3 Why Atoms Bond

Bloom's: Remembering/Understanding

13) What is the name given to an atom that gains or loses electrons in a chemical reaction?

- A) molecule
- B) ion
- C) isotope
- D) nucleon

Answer: B

Diff: 1

Chapter Subhead: 3.3 Why Atoms Bond

Bloom's: Remembering/Understanding

14) When an atom gains an electron during a chemical reaction, which of the following is true?

- A) That atom has a negative charge.
- B) That atom has a positive charge.
- C) That atom has no charge.
- D) That atom has no valence electrons.

Answer: A

Diff: 1

Chapter Subhead: 3.3 Why Atoms Bond

Bloom's: Remembering/Understanding

15) In which type of chemical bonding are electrons shared between adjacent atoms?

- A) ionic
- B) subatomic
- C) covalent
- D) isotopic

Answer: C

Diff: 1

Chapter Subhead: 3.3 Why Atoms Bond

Bloom's: Remembering/Understanding

16) How do the electrons behave in a mineral with metallic bonding?

- A) They are tightly bound to certain atoms and cannot readily move.
- B) They can move relatively easily from atom to atom inside the mineral.
- C) They react with protons to make neutrons in the outer valence shells.
- D) They move to adjacent negative ions, forming positive ions.

Answer: B

Diff: 1

Chapter Subhead: 3.3 Why Atoms Bond

Bloom's: Remembering/Understanding

- 17) In which type of bond are electrons transferred?  
A) covalent bond  
B) metallic bond  
C) ionic bond  
D) Electrons are transferred in all of these types of bonds.

Answer: C

Diff: 1

Chapter Subhead: 3.3 Why Atoms Bond

Bloom's: Remembering/Understanding

- 18) What mineral is the hardest known substance in nature?  
A) silicate  
B) native gold  
C) diamond  
D) muscovite

Answer: C

Diff: 1

Chapter Subhead: 3.4 Properties of Minerals

Bloom's: Remembering/Understanding

- 19) The strong tendency of certain minerals to break along smooth, parallel planes is known as \_\_\_\_\_.

- A) streak  
B) cleavage  
C) cracking luster  
D) crystal form

Answer: B

Diff: 1

Chapter Subhead: 3.4 Properties of Minerals

Bloom's: Remembering/Understanding

- 20) A cubic centimeter of quartz, olivine, and gold weigh 2.5, 3.0, and 19.8 grams respectively. This indicates that \_\_\_\_\_.

- A) gold has a higher density and specific gravity than quartz and olivine  
B) gold is 6 to 7 times harder than olivine and quartz  
C) gold and olivine are silicates, quartz is elemental silicon  
D) olivine and quartz powders are harder than metallic gold

Answer: A

Diff: 2

Chapter Subhead: 3.4 Properties of Minerals

Bloom's: Applying/Analyzing

21) \_\_\_\_\_ has the highest specific gravity.

- A) Wood
- B) Water
- C) Gold
- D) Quartz

Answer: C

Diff: 1

Chapter Subhead: 3.4 Properties of Minerals

Bloom's: Remembering/Understanding

22) The Mohs scale measures which property of minerals?

- A) hardness
- B) cleavage
- C) specific gravity
- D) opacity

Answer: A

Diff: 1

Chapter Subhead: 3.4 Properties of Minerals

Bloom's: Remembering/Understanding

23) What physical property denotes the color of a powdered mineral?

- A) fracture
- B) hardness
- C) streak
- D) luster

Answer: C

Diff: 1

Chapter Subhead: 3.4 Properties of Minerals

Bloom's: Remembering/Understanding

24) Which of the following is true about a mineral's streak?

- A) All minerals produce a streak when rubbed across a streak plate.
- B) A mineral's color is a better way to identify it than by its streak.
- C) A mineral's streak is always the same color as the solid mineral's color.
- D) Streak is a more reliable way to identify a mineral than by color.

Answer: D

Diff: 1

Chapter Subhead: 3.4 Properties of Minerals

Bloom's: Remembering/Understanding

25) \_\_\_\_\_ reacts readily with acids such as hydrochloric.

- A) Calcite
- B) Quartz
- C) Diamond
- D) Talc

Answer: A

Diff: 1

Chapter Subhead: 3.4 Properties of Minerals

Bloom's: Remembering/Understanding

26) Which of the following describes the light reflecting characteristics of a mineral?

- A) luster
- B) color streak
- C) virtual absorption
- D) fluorescence

Answer: A

Diff: 1

Chapter Subhead: 3.4 Properties of Minerals

Bloom's: Remembering/Understanding

27) Gold's tenacity can be described as \_\_\_\_\_.

- A) malleable
- B) sectile
- C) elastic
- D) brittle

Answer: A

Diff: 1

Chapter Subhead: 3.4 Properties of Minerals

Bloom's: Remembering/Understanding

28) You come across a whitish mineral in the field. You think it might be calcite, but you aren't sure. Which of the following would be the best way to determine if your sample is calcite?

- A) Smash it with a rock hammer to see if it fractures.
- B) Apply dilute hydrochloric acid to see if it fizzes.
- C) Check its streak color.
- D) Test its hardness.

Answer: B

Diff: 2

Chapter Subhead: 3.4 Properties of Minerals

Bloom's: Applying/Analyzing

29) Which group of minerals are the most abundant in the Earth's crust?

- A) sulfides
- B) carbonates
- C) silicates
- D) chlorides

Answer: C

Diff: 1

Chapter Subhead: 3.5 Mineral Groups

Bloom's: Remembering/Understanding

30) How many elements compose the majority of rock-forming minerals?

- A) 4
- B) 6
- C) 8
- D) 10

Answer: C

Diff: 1

Chapter Subhead: 3.5 Mineral Groups

Bloom's: Remembering/Understanding

31) Which of the following best describes the way minerals are classified?

- A) on the basis of similar crystal structures and compositions
- B) on the basis of similar color and shape
- C) on the basis of similar names and color
- D) on the basis of being found in the same place

Answer: A

Diff: 1

Chapter Subhead: 3.5 Mineral Groups

Bloom's: Remembering/Understanding

32) All silicate minerals contain \_\_\_\_\_ and \_\_\_\_\_.

- A) iron; silicon
- B) silicon; sodium
- C) oxygen; carbon
- D) silicon; oxygen

Answer: D

Diff: 1

Chapter Subhead: 3.6 The Silicates

Bloom's: Remembering/Understanding



33) What element is the most abundant in the Earth's crust by weight?

- A) carbon
- B) chlorine
- C) oxygen
- D) sodium

Answer: C

Diff: 1

Chapter Subhead: 3.6 The Silicates

Bloom's: Remembering/Understanding

34) The ion at the center of a silicate tetrahedron is surrounded by \_\_\_\_\_.

- A) 4 oxygen ions
- B) 6 oxygen ions
- C) 4 sodium ions
- D) 6 sodium ions

Answer: A

Diff: 1

Chapter Subhead: 3.6 The Silicates

Bloom's: Remembering/Understanding

35) Silicate minerals polymerize to form a variety of structures. Three-dimensional structures have \_\_\_\_\_ silicon than those composed of independent tetrahedra.

- A) less
- B) more

Answer: B

Diff: 1

Chapter Subhead: 3.6 The Silicates

Bloom's: Remembering/Understanding

36) Which mineral is composed of silicon dioxide ( $\text{SiO}_2$ )?

- A) calcite
- B) diamond
- C) olivine
- D) quartz

Answer: D

Diff: 1

Chapter Subhead: 3.7 Common Silicate Minerals

Bloom's: Remembering/Understanding

37) Parallel, straight, linear imperfections visible on the cleavage surfaces of plagioclase feldspar are called \_\_\_\_\_.

- A) striations
- B) fractures
- C) cleavage
- D) streaks

Answer: A

Diff: 1

Chapter Subhead: 3.7 Common Silicate Minerals

Bloom's: Remembering/Understanding

38) Which of the following minerals is a silicate?

- A) hematite
- B) muscovite
- C) calcite
- D) halite

Answer: B

Diff: 1

Chapter Subhead: 3.7 Common Silicate Minerals

Bloom's: Remembering/Understanding

39) Which one of the following is a sodium and calcium feldspar with striations?

- A) orthoclase
- B) microcline
- C) plagioclase
- D) sanidine

Answer: C

Diff: 1

Chapter Subhead: 3.7 Common Silicate Minerals

Bloom's: Remembering/Understanding

40) Which of the following minerals is a ferromagnesian silicate?

- A) quartz
- B) orthoclase
- C) hornblende
- D) muscovite

Answer: C

Diff: 1

Chapter Subhead: 3.7 Common Silicate Minerals

Bloom's: Remembering/Understanding

41) Which of the following minerals is in the mineral group known as mica?

- A) orthoclase
- B) muscovite
- C) augite
- D) olivine

Answer: B

Diff: 1

Chapter Subhead: 3.7 Common Silicate Minerals

Bloom's: Remembering/Understanding

42) Which of the following best characterizes ferromagnesian silicates?

- A) They contain iron and magnetite, are black in color, and they have metallic lusters.
- B) They are black to dark-green silicate minerals containing iron and magnesium.
- C) They contain magnetite and ferrite, and they are clear to light green.
- D) They are mostly clear, colorless, and rich in the elements magnesium and ferrum.

Answer: B

Diff: 1

Chapter Subhead: 3.7 Common Silicate Minerals

Bloom's: Remembering/Understanding

43) Which of the following correctly describes the difference between ferromagnesian and nonferromagnesian silicates?

- A) Nonferromagnesian silicates are darker in color and do not contain iron or magnesium.
- B) Nonferromagnesian silicates are lighter in color and do not contain iron or magnesium.
- C) Nonferromagnesian silicates are lighter in color and contain iron or magnesium.
- D) Nonferromagnesian silicates are darker in color and contain iron or magnesium.

Answer: B

Diff: 1

Chapter Subhead: 3.7 Common Silicate Minerals

Bloom's: Remembering/Understanding

44) \_\_\_\_\_ exhibit a sheet-like silicate structure.

- A) Carbonates
- B) Pyroxenes
- C) Clays
- D) Feldspars

Answer: C

Diff: 1

Chapter Subhead: 3.7 Common Silicate Minerals

Bloom's: Remembering/Understanding

45) Which one of the following is a typical product of weathering?

- A) micas
- B) ferromagnesian
- C) feldspars
- D) clays

Answer: D

Diff: 1

Chapter Subhead: 3.7 Common Silicate Minerals

Bloom's: Remembering/Understanding

46) What is the name of the dark-colored mica?

- A) calcite
- B) biotite
- C) quartz
- D) olivine

Answer: B

Diff: 1

Chapter Subhead: 3.7 Common Silicate Minerals

Bloom's: Remembering/Understanding

47) Hornblende and the other amphiboles have what type of silicate structure?

- A) metallic
- B) sheet
- C) 3-D framework
- D) double chains

Answer: D

Diff: 1

Chapter Subhead: 3.7 Common Silicate Minerals

Bloom's: Remembering/Understanding

48) How does one classify a nonsilicate mineral group?

- A) silicon tetrahedra
- B) negatively charged ion or complex ion
- C) cleavage direction
- D) opacity

Answer: B

Diff: 1

Chapter Subhead: 3.8 Important Nonsilicate Minerals

Bloom's: Remembering/Understanding

49) Which common nonsilicate mineral is used in wallboard?

- A) gypsum
- B) pyrite
- C) bentonite
- D) halite

Answer: A

Diff: 1

Chapter Subhead: 3.8 Important Nonsilicate Minerals - "Did You Know?" Box

Bloom's: Remembering/Understanding

50) Which of the following is an important nonsilicate mineral?

- A) calcite
- B) dolomite
- C) quartz
- D) Calcite and dolomite are both important nonsilicate minerals.
- E) Calcite and quartz are both important nonsilicate minerals.

Answer: D

Diff: 1

Chapter Subhead: 3.8 Important Nonsilicate Minerals

Bloom's: Remembering/Understanding

51) What is a naturally occurring concentration of one or more metallic minerals that can be extracted economically called?

- A) nonrenewable resource
- B) compound
- C) ore
- D) deposit

Answer: C

Diff: 1

Chapter Subhead: 3.9 Minerals: A Nonrenewable Resource

Bloom's: Remembering/Understanding

52) Cell phones are often recycled to collect gold and other metals from them. This is profitable because \_\_\_\_\_.

- A) the demand for the precious metals has increased
- B) technological advances allow the metals to be extracted more efficiently
- C) it is a renewable resource
- D) the demand for the precious metals has increased, and technological advances allow the metals to be extracted more efficiently
- E) technological advances allow the metals to be extracted more efficiently, and it is a renewable resource

Answer: D

Diff: 1

Chapter Subhead: 3.9 Minerals: A Nonrenewable Resource

Bloom's: Remembering/Understanding

53) Ruby and sapphire are red and blue forms of the mineral \_\_\_\_\_.

- A) diamond
- B) turquoise
- C) emerald
- D) corundum

Answer: D

Diff: 1

Chapter Subhead: 3.9 Minerals: A Nonrenewable Resource - "Did You Know?" Box

Bloom's: Remembering/Understanding

54) Mineral resources are \_\_\_\_\_ resources.

- A) renewable
- B) nonrenewable
- C) Mineral resources can be both renewable and nonrenewable.

Answer: B

Diff: 1

Chapter Subhead: 3.9 Minerals: A Nonrenewable Resource

Bloom's: Remembering/Understanding

55) Examine the words and/or phrases below and determine the relationship among the majority of words/phrases. Choose the option that does not fit the pattern.

- A) electron
- B) compound
- C) proton
- D) neutron

Answer: B

Diff: 1

Chapter Subhead: 3.2 Atoms: Building Blocks of Minerals

Bloom's: Remembering/Understanding

56) Examine the words and/or phrases below and determine the relationship among the majority of words/phrases. Choose the option that does not fit the pattern.

- A) quartz
- B) mica
- C) feldspar
- D) calcite

Answer: D

Diff: 2

Chapter Subhead: 3.7 Common Silicate Minerals

Bloom's: Applying/Analyzing

57) Examine the words and/or phrases below and determine the relationship among the majority of words/phrases. Choose the option that does not fit the pattern.

- A) diamond
- B) calcite
- C) gypsum
- D) dolomite

Answer: A

Diff: 2

Chapter Subhead: 3.8 Important Nonsilicate Minerals

Bloom's: Applying/Analyzing

**Critical thinking and discussion questions.** Use complete sentences, correct spelling, and the information presented in chapter 3 to answer the questions below.

58) Based on the brief discussion of chemistry and chemical bonding in chapter 3, why do minerals rarely exhibit pure chemical compositions (100% always the same chemical composition)?

Answer: Certain elements can substitute for others of similar size without changing the minerals' internal structure.

Diff: 3

Chapter Subhead: 3.1 Minerals: Building Blocks of Rocks

Bloom's: Evaluating/Creating

59) Overall, the physical properties of minerals provide a reliable means to identify common minerals. However, certain properties can exhibit a range of characteristics or values making them less useful for identification purposes. Choose three physical properties that might vary considerably between samples of the same mineral and explain why such variability would exist.

Answer: Certain elements can substitute for others of similar size without changing the minerals' internal structure.

Diff: 3

Chapter Subhead: 3.4 Properties of Minerals

Bloom's: Evaluating/Creating

60) Considering the composition and structure of Earth discussed in chapter 1, do you think all of the possible silicate (and even mineral) structures have been identified by scientists? Discuss why or why not. Also, does this same reasoning apply to all possible chemical elements of Earth?




Answer: It is probable that there are more silicate and mineral structures yet to be identified by scientists. We have not been able to extensively explore the layers of the earth nor the surface of other planets.

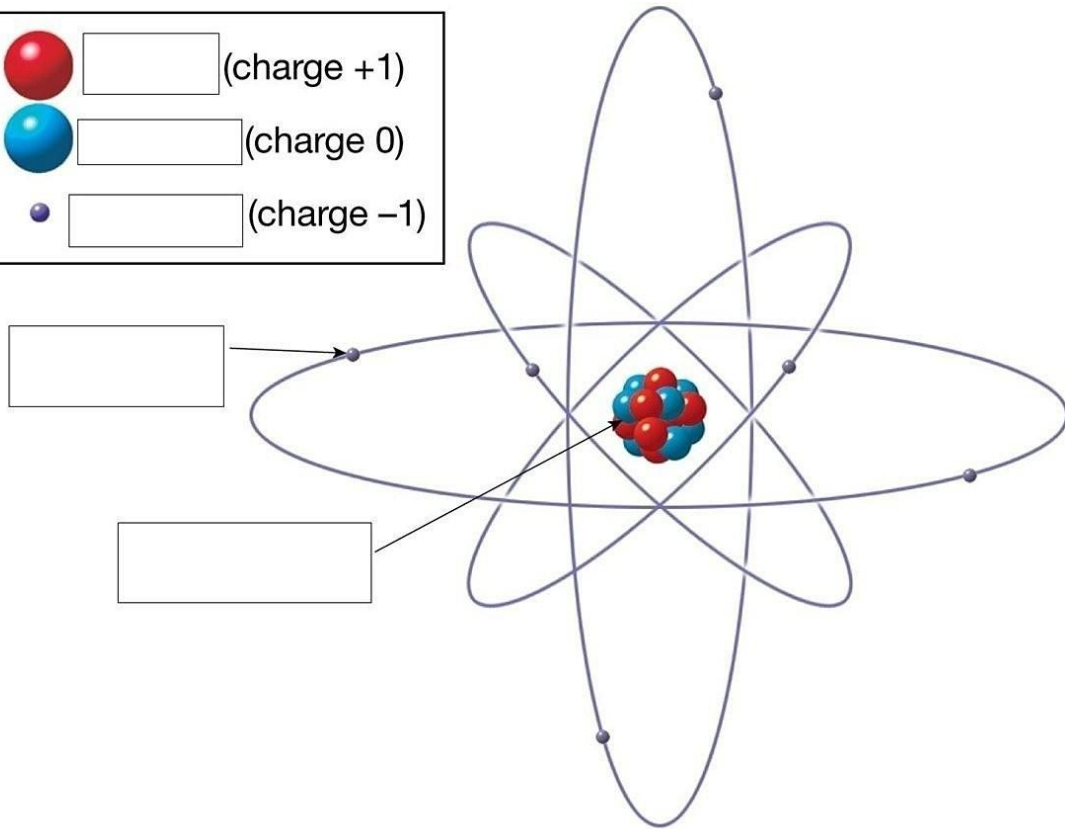
Diff: 3

Chapter Subhead: 3.5 Mineral Groups

Bloom's: Evaluating/Creating

61) Label the various parts of an atom in the diagram below.

|   |                      |             |
|---|----------------------|-------------|
|  | <input type="text"/> | (charge +1) |
|  | <input type="text"/> | (charge 0)  |
|  | <input type="text"/> | (charge -1) |



© 2012 Pearson Education, Inc.

Answer: See Figure 3.4A in chapter 3 of the *Essentials of Geology, 13e* textbook


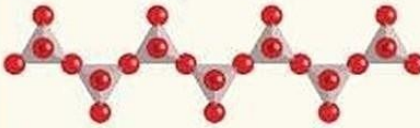
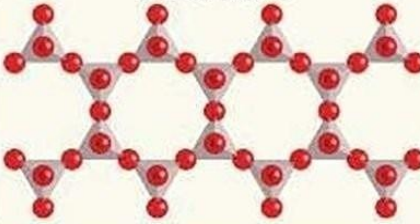
Diff: 1

Chapter Subhead: 3.2 Atoms: Building Blocks of Minerals

Bloom's: Remembering/Understanding



62) Fill in the table below on silicate minerals.

| Mineral/Formula   | Cleavage                 | Silicate Structure   |
|---|--------------------------|--|
| Olivine group<br>(Mg, Fe) <sub>2</sub> SiO <sub>4</sub> | (a) <input type="text"/> | Single tetrahedron<br> |
| (b) <input type="text"/>                                | Two planes at 90°        | Single chains<br>      |
| (c) <input type="text"/>                                | (d) <input type="text"/> | Double chains<br>     |

Answer: (a) none

(b) pyroxene group - augite

(c) amphibole group - hornblende

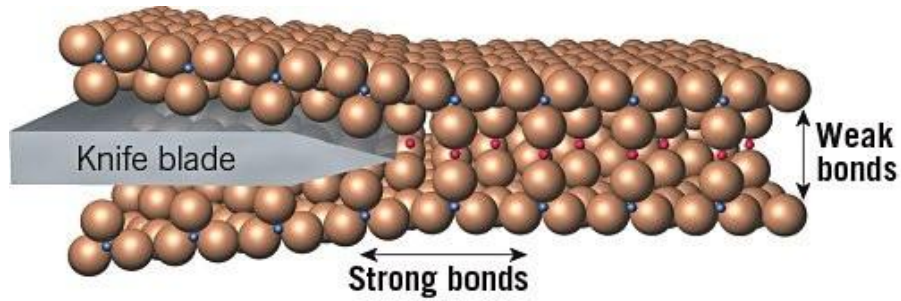
(d) two planes at 60 and 120 degrees

Diff: 2

Chapter Subhead: 3.7 Common Silicate Minerals

Bloom's: Applying/Analyzing

63) Look at the figure below. Which mineral is best represented by this figure?



- A) mica
- B) quartz
- C) diamond
- D) calcite

Answer: A

Diff: 1

Chapter Subhead: 3.4 Properties of Minerals

Bloom's: Remembering/Understanding